

KENDRIYA VIDYALAYA AFS BAGDOGRA
PERIODIC TEST -I (2019-20)
SAMPLE QUESTION PAPER

SUBJECT	MATHS		CLASS	5
TIME	90 min.		M.M.	50

NAME _____ ROLL NO _____ SECTION _____

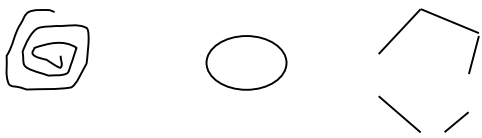
SIGNATURE OF INVIGILATOR _____ MARKS OBTAINED _____


SIGNATURE OF EXAMINER


: _____

ALL QUESTIONS ARE MANDATORY

Concept (Knowledge)

Q1	Choose the correct answer from the bracket and fill in the blanks.	
A.	There are _____ zeroes in ten lakh. (7,6,8)	1
B.	Obtuse angles are _____ than a right angle. (less,more,equal)	1
C.	Tick (✓) the closed shape. 	1
D.	The space covered by a shape is called as its _____. (perimeter, area, boundary)	1
E.	9/5 is a _____ fraction.(proper, improper, mixed)	1

F.	A triangle has _____ number of line of symmetry. (3, 2 ,4)	1				
Q-2	Write these mixed fraction into improper fraction- a. $2\frac{1}{3}$ _____ b. $3\frac{1}{6}$ _____	2				
Q-3	Make a tile design from a square. 	2				
Q4	<p><u>Fish drying factory</u></p> <p>When fresh fish is dried it becomes <u>1</u> of its weight. 3</p> <p>Calculate for 6kg of fresh fish.</p> <table border="1" data-bbox="461 989 1219 1230"> <tr> <td>We buy fresh fish for</td> <td>Rs. 15 per kg</td> </tr> <tr> <td>We sell dried fish for</td> <td>Rs. 70 per kg</td> </tr> </table> <p>We dry 6kg fresh fish to get 2 kg dried fish.</p> <p>a) For 6kg fresh fish we have to pay $6 \times \underline{\hspace{2cm}}$ = Rs. 90</p> <p>b) We will sell 2kg dried fish and get $2 \times 70 = \text{Rs. } \underline{\hspace{2cm}}$.</p> <p>c) So if we dry 6kg fresh fish we will earn $\underline{\hspace{2cm}} - 90 = \text{Rs. } \underline{\hspace{2cm}}$.</p> <p>d) But if we dry 6000kg we can earn Rs. $\underline{\hspace{2cm}} \times 1000$ in one month.</p>	We buy fresh fish for	Rs. 15 per kg	We sell dried fish for	Rs. 70 per kg	4
We buy fresh fish for	Rs. 15 per kg					
We sell dried fish for	Rs. 70 per kg					
	Concept (UNDERSTANDING)					

<p>Q-5</p>	<p>Write the fraction of shaded grid?</p> <hr/> 	<p>1</p>
<p>Q-6</p>	<p>Find out the area of square of side 7 cm.</p> <hr/>	<p>1</p>
<p>Q-7</p>	<p>Arrange the numbers in ascending order.</p> <p>79833, 79383, 78933, 79338</p> <hr/>	<p>2</p>
<p>Q-8</p>	<p>Circle the numbers which look the same on half a turn.</p> <p>96 , 181 , 1010 , 19</p>	<p>2</p>
<p>Q-9</p>	<p>Divide each of these given rectangles into six equal parts. Use different way for each of the rectangles.</p> <div style="display: flex; justify-content: space-around; align-items: center;"> <div data-bbox="331 1671 774 1906" style="border: 1px solid black; width: 150px; height: 100px;"></div> <div data-bbox="927 1671 1385 1906" style="border: 1px solid black; width: 150px; height: 100px;"></div> </div>	<p>2</p>

Q-10	<p><u>Yuvi's shopping list</u></p> <table border="1" style="margin-left: auto; margin-right: auto;"> <thead> <tr> <th>Item</th> <th>Price in Rs(Per kg)</th> </tr> </thead> <tbody> <tr> <td>Apple</td> <td>100</td> </tr> <tr> <td>Orange</td> <td>60</td> </tr> <tr> <td>Grapes</td> <td>70</td> </tr> <tr> <td>Mango</td> <td>64</td> </tr> <tr> <td>Straw berry</td> <td>84</td> </tr> </tbody> </table> <p>a) How much does 2kg of orange cost?</p> <p>_____</p> <p>b) How much does 1 kg of strawberry cost?</p> <p style="text-align: center;">$\frac{\quad}{2}$</p> <p>_____</p> <p>c) What is the price of $1\frac{1}{4}$ kg of mango?</p> <p>_____</p> <p>d) What is the price of $\frac{1}{2}$ kg of apple?</p>	Item	Price in Rs(Per kg)	Apple	100	Orange	60	Grapes	70	Mango	64	Straw berry	84	1+1 +2 M
Item	Price in Rs(Per kg)													
Apple	100													
Orange	60													
Grapes	70													
Mango	64													
Straw berry	84													
	concept (<u>Ability to compute</u>)													
Q-11	<p>Multiply</p> <p>465x 75=</p>	1												

Q-12	<p>Find</p> <p>a. $\frac{3}{4}$ of 100 =</p> <p>b. $\frac{1}{2}$ of 30 =</p>	1
Q-13	<p>form the smallest and greatest 5 digits number by using the digits. 7,3,0,5,4</p> <p>a. _____</p> <p>b. _____</p>	1
Q-14	<p>Find out $\frac{1}{2}$ of straight angle.</p> <p>_____.</p>	1
Q-15	<p>Motor boats travel faster, at the speed of about 20km in one hour.</p> <p>a) How far would the motor boats go in 3 hours? _____.</p> <p>b) How much time will they take to go 80km? _____.</p>	2
Q-16	<p>Look at the names written with straight lines. Count the right angles and fill in the blanks.</p> <p>SEETA</p> <p>_____</p> <p>LAXMAN</p> <p>_____</p>	2

<p>Q-17</p>	<p>17. Solve these</p> <p>a) A motor boat travels at a speed of about 20 km in one hour. How far would the motor boat go in three and half hours?</p> <p>Ans:</p> <p>B) A van moves with speed of 34km/hr. How far van travel in 4 hours?</p>	<p>4</p>
<p align="center">Concept (<u>Problem Solving Ability</u>)</p>		
<p>Q-18</p>	<p>The length and breadth of a garden are 45 metres and 25 metres respectively. What is the area of that garden?</p>	<p>1</p>
<p>Q-19</p>	<p>Write two equivalent fractions of $\frac{3}{5} = \frac{\quad}{\quad} = \frac{\quad}{\quad}$.</p>	<p>1</p>
<p>Q-20</p>	<p>Calculate the side of the square if it`'s area is 25 sq. m.</p>	<p>1</p>

Q-21	a) The cost of 1 kg potato is Rs. 10. What will be the cost of 2 ½ kg of potato?	1
Q-22	If the area of a rectangle is 35sq. m and length of the rectangle is 7 m. calculate the breadth.	2
Q-23	Reenu had 20 toffees. She gave half of the toffees to Rekha .How many toffees are left with her?	2
Q-24	a. Draw the angle of following measures and also write type of the angle. I. 45° _____ II. 100° _____	2+2

b. Match the following:

a) $\frac{1}{2}$ Straight angle

90°

b) $\frac{1}{3}$ of a right angle

45°

c) $\frac{1}{2}$ of Right angle

60°

d) $\frac{1}{3}$ of a straight angle

30°