

TOTAL PAGES :07

**KENDRIYA VIDYALAYA AFS, BAGDOGRA**  
**MODEL PAPER FOR PERIODIC TEST II, 2019-20**

<b>SUBJECT:</b>	<b>EVS</b>		<b>CLASS:</b>	<b>V</b>
<b>TIME:</b>	<b>90 MIN.</b>		<b>MAX. MARKS:</b>	<b>50</b>

**INSTRUCTIONS:**



- 1. All questions are compulsory.**
- 2. Write the answer in the space provided in the booklet itself.**



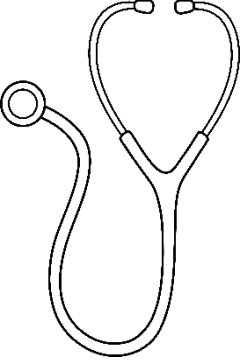


NAME: \_\_\_\_\_ SEC: \_\_\_\_\_ ROLL NO: \_\_\_\_\_

INVIGILATOR'S SIGN: \_\_\_\_\_ MARKS OBTAINED: \_\_\_\_\_


EXAMINER'S SIGN: \_\_\_\_\_

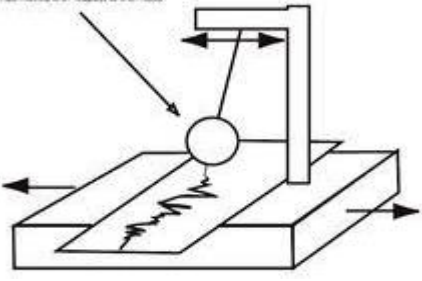
**OBSERVATION**

<b>1.</b>	<b>Observe the pictures and answer the following questions:</b>	
<b>a)</b>	Which place is this?  _____	 <b>1M</b>
<b>b)</b>	What do you observe in the given picture?  _____	 <b>1M</b>

<p>c)</p>	<p>What is the house made of snow called?</p> <p>_____</p> <p>_____</p>		<p>1M</p>
<p>d)</p>	<p>Which natural calamity is this?</p> <p>_____</p>		<p>1M</p>
<p>e)</p>	<p>What do you see in this picture?</p> <p>_____</p>		<p>1M</p>
<p>f)</p>	<p>What is the name of this personality?</p> <p>_____</p>		<p>1M</p>
<p>g)</p>	<p>Who is this?</p> <p>_____</p>		<p>1M</p>

<p><b>h)</b></p>	<p>What are they doing?</p> <p>_____</p> 	<p><b>1M</b></p>
------------------	--	------------------

<p><b>i)</b></p>	<p>The tent of Changpas is called _____</p> 	<p><b>1M</b></p> <p><b>1 M</b></p>
------------------	--	------------------------------------

<p><b>j)</b></p>	<p>Identify this instrument.</p> <p>_____</p> 	
------------------	---	--

<p><b>2.</b></p> <p><b>a.</b></p> <p><b>b.</b></p>	<p><b>Write two name of each.</b></p> <p>Outdoor games _____</p> <p>Indoor games _____</p>	<p><b>2 M</b></p>
--	--	-------------------

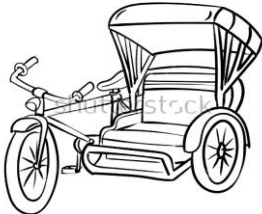

<p><b>3</b></p>	<p><b>What is refinery ?</b></p> <p>_____</p> <p>_____</p> <p>_____</p>	<p><b>2 M</b></p>
-----------------	---	-------------------

**IDENTIFICATION**

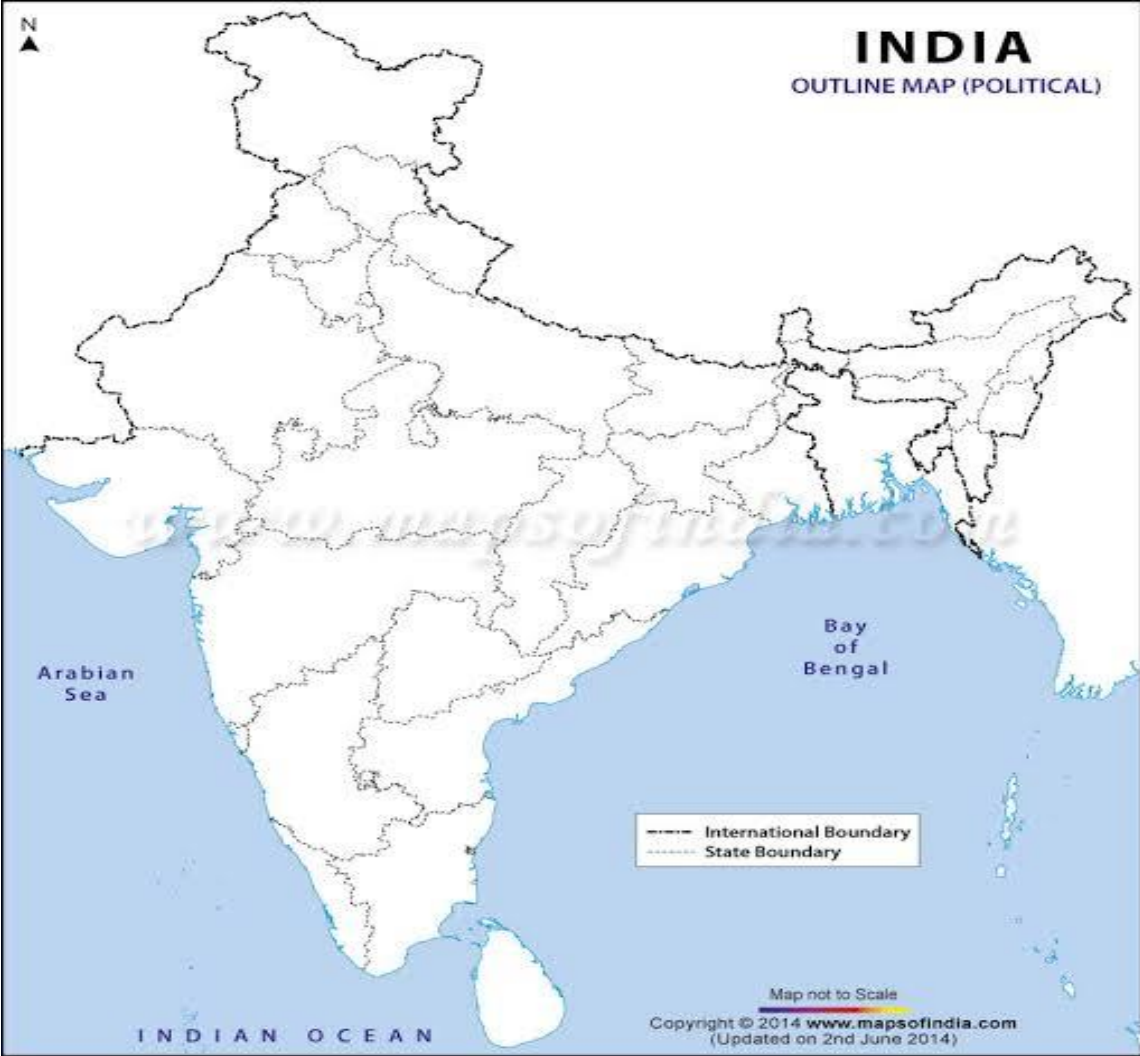
<p><b>1.</b></p> <p><b>a</b></p> <p><b>b</b></p>	<p><b>Choose the correct answer to fill in the blanks.</b></p> <p>The air from our mouth is _____.(warm/cold )</p> <p>Excessive rain can lead to _____. (flood/famine)</p>	<p><b>1M</b></p> <p><b>1 M</b></p>
--	--	------------------------------------

<b>2.</b> <b>a</b> <b>b</b>	<b>Write 'True' for the correct statement and 'False' for the wrong statement.</b> Co-operation is the strength of a team. [                          ] Gandhiji fought against untouchability. [                          ]	<b>1M</b> <b>1 M</b>
<b>3.</b>	<b>What are natural calamities ?</b> _____ _____ _____ _____	<b>2 M</b>
<b>4.</b>	<b>Why does our heart beats faster after running a 100 metre race ?</b> _____ _____ _____	<b>2M</b>
<b>5.</b>	<b>Write two differences between the houses of Mumbai and Srinagar ?</b> _____ _____ _____	<b>2M</b>
<b>6.</b>	<b>List two benefits of playing sports ?</b> _____ _____ _____	<b>2M</b>
<b>7.</b>	<b>Write about their work-</b> Sweeper-_____ _____ Servant-_____ _____	<b>2M</b>

8.	<b>Write few lines about changpa tribe.</b> <hr/> <hr/> <hr/> <hr/> <hr/> <hr/> <hr/> <hr/> <hr/> <hr/> <hr/> <hr/> <hr/> <hr/> <hr/> <hr/> <hr/> <hr/> <hr/> <hr/> <hr/> <hr/> <hr/> <hr/> <hr/> <hr/>	5M
<b><u>DISCOVERY OF FACTS</u></b>		
Q 1	<b>Fill in the blanks with ‘hot or cold’</b>	
A	_____ air is heavy and comes down.	1M
B	_____ air is light and rises.	
Q 2	<b>What is seismology?</b>	
Ans	_____	1M

<b>Q 3</b> <b>Ans</b>	<b>Which is the famous item made by fur(hair)of goats?</b> <hr/>	<b>1 M</b>
<b>Q 4</b> <b>A</b> <b>B</b>	<b>Write the phone numbers of following-</b> Ambulance _____ Police station _____	<b>1 M</b>
<b>Q 5</b>	<b>Observe the picture and write which vehicle is ‘run by fuel’ or ‘run without fuel.’</b> <div style="display: flex; justify-content: space-around; align-items: center;"> <div style="text-align: center;">  <p>_____</p> </div> <div style="text-align: center;">  <p>_____</p> </div> </div>	<b>1M</b>
<b>Q 6</b>	<b>Who were untouchables?</b> <hr/> <hr/>	<b>1 M</b>
<b>Q 7</b> <b>Ans</b>	<b>Why do people in Leh collect dry fruits and vegetables ?</b> <hr/> <hr/> <hr/> <hr/>	<b>2 M</b>
<b>Q 8</b> <b>Ans</b>	<b>Why do we blow air at a burning fire ?.</b> <hr/> <hr/> <hr/>	<b>2 M</b>

<p><b>Q 9</b> <b>Ans</b></p>	<p><b>How can you fulfil your dreams ?</b></p> <hr/> <hr/> <hr/> <hr/>	<p><b>2 M</b></p>
----------------------------------	--	-------------------

<p><b>Q 10</b> <b>a</b> <b>b</b> <b>c</b> <b>d</b> <b>e</b></p>	<p><b>Show the following places on map</b></p> <p><b>Jammu &amp; Kashmir</b></p> <p><b>Gujarat</b></p> <p><b>Kerala</b></p> <p><b>Maharashtra</b></p> <p><b>Madhya Pradesh</b></p> 	<p><b>5M</b></p>
---	--	------------------





केन्द्रीय विद्यालय वायुसेना, बागडोगराअभ्यास सामयिक परीक्षा-॥सत्र- (2019-20)

विषय:	हिन्दी	कक्षा:	पाँच
अवधि:	90 मिनट	पूर्णांक:	50

नाम: \_\_\_\_\_ अनुक्रमांक \_\_\_\_\_ अनुभाग \_\_\_\_\_

निरीक्षक हस्ताक्षर: \_\_\_\_\_ परीक्षक हस्ताक्षर : \_\_\_\_\_ प्राप्तांक : \_\_\_\_\_

**निर्देश:-** सभी प्रश्न अनिवार्य है।

पठनअपठित गद्यांश

प्रश्न १.	नीचे दिए गए अनुच्छेद को पढ़कर प्रश्नों के उत्तर लिखो।
	<p>विश्व के सात आश्चर्यों में से एक है पिरामिड । ये तिकोनी शकल के भवन हैं । वास्तव में ये मिस्र के बादशाहों के मकबरे हैं । उस समय मिस्र में रहने वालों का यह विश्वास था कि मृत मनुष्य की आत्मा फिर उसके शरीर में वापस आ जाती है । इसलिये जब भी मिस्र देश में किसी बादशाह की मृत्यु होती तो वे उसके शरीर पर विशेष प्रकार का लेप लगाकर जमीन के नीचे एक गहरे तहखाने में रख देते थे । उसके साथ ही सोने-चाँदी के बर्तन, विभिन्न प्रकार के इत्र और कई प्रकार के आवश्यक सामान रख देते थे ताकि जब भी बादशाह की आत्मा शरीर में वापस आये तो उसे आवश्यक सामग्री पास पड़ी मिले । मृत व्यक्तियों के इस प्रकार रखे हुए शरीर को ममी कहते हैं ।</p>

क)	विश्व के सात आश्चर्यों में से कौनसा आश्चर्य मिस्र में पाया जाता है ? उत्तर: _____	1
ख)	पिरामिड का आकार कैसा होता है ? उत्तर: _____	1
ग)	पिरामिड क्या है ? उत्तर: _____	1
घ)	प्राचीन समय में मिस्र में रहने वालों का क्या विश्वास था ? उत्तर: _____	1
ङ)	ममी किसे कहते हैं? उत्तर: _____	1
	<b><u>लेखन</u></b>	
प्रश्न-1.	उबातुन किस रंग का फूलदान लेकर आया था ? उत्तर: _____ _____	1
प्रश्न -2.	बिशन कितने साल का था? उत्तर- _____ _____	1
प्रश्न-3.	अँधेर नगरी के बारे में कोई 2 अजीब बातें लिखो? ? उत्तर: _____ _____	2
प्रश्न-4.	मैडल से चूड़ियाँ बनवा लेने पर दादी ने बुआ को महामूर्ख क्यों माना ? उत्तर: _____	2

	_____	
	_____	
प्रश्न 5.	कवि रात में बाथरूम बाहर जाने से क्यों मना कर रहा है? उत्तर- _____	2
	_____	
प्रश्न 6.	स्वामी अपनी दादी को अपने दोस्त राजम के बारे में क्या-क्या बता रहा था? उत्तर- _____	2
	_____	
	<b><u>व्याकरण</u></b>	
	उचित कारक चिन्हों से खाली स्थान भरो - (ने, में, से, पर)	
1)	मुझे उसने अपने घर _____ बाहर जाने को कहा ।	1
	नीचे दिये गये मुहावरों से वाक्य बनाओ -	
2)	आँख बचाना - _____	1
	_____	
	नीचे लिखे वाक्यों में सर्वनाम का ठीक रूप छांट कर लिखो   -	
3)	अजय _____ घर नागालैंड के किस शहर में है ? (तुम)	1
	लिंग बदलो -	
4)	काका - _____	1
	विलोम शब्द लिखो -	

5)	बुद्धिमान - _____	1
6)	वचन बदलो - तीतर - _____	1
7)	नीचे दिए वाक्यों में से संज्ञा शब्द पर गोला लगाओ- हम आज दिल्ली जायेंगे।	1
8)	निम्नलिखित शब्द का तुकात्मक शब्द लिखो- खेल - _____	1
9)	निम्नलिखित वाक्य में क्रिया शब्द पर गोला लगाओ- मुझे खेलना अच्छा लगता है।	1
10)	निम्नलिखित वाक्य में विशेषण शब्द पर गोला लगाओ- वह बहुत अच्छा खेलता है।	1
<b><u>सृजनात्मक-लेखन</u></b>		
प्रश्न 1.	“बाघ ” पर पाँच वाक्य लिखो।  -----  -----  -----  -----  -----  -----	5

	----- ----- ----- -----	
प्रश्न-2.	'मेरा प्रिय पक्षी' पर पाँच वाक्य लिखो । ----- ----- ----- ----- ----- ----- ----- ----- ----- -----	5
	<b>वर्तनी</b>	
प्रश्न 1.	दिये गये सही शब्दों पर ○ (गोला) लगायें ।	
क)	अधीक्षक      अधिक्षक      अधिक्षक	1
ख)	बक्शा      बक्सा      बाक्श	1
ग)	खामोसि      खमोशी      खामोशी	1
घ)	गुलक      गुल्लक      गूल्लक	1
ड.)	दूकान      दुकान      दुकन	1

<p>प्रश्न 2.</p>	<p>नीचे लिखे शब्दों को शुद्ध करके लिखो-</p> <p>क) चक्रबर्ती- _____</p> <p>ख) सुरक्शा- _____</p> <p>ग) वरदी - _____</p> <p>घ) अन्धेरा- _____</p> <p>ङ) करनल - _____</p>	
	<p><b>सुलेख</b></p>	
	<p>नीचे दिए गए अनुच्छेद को सुन्दर एवं साफ़ अक्षरों में लिखें।</p>	<p>5</p>
	<p>अहा ! कितना प्रिय शब्द है माँ ! माता, जननी , अम्मा, अम्बा, मैया, मातुश्री, मम्मी आदि इसके अनेक नाम हैं । जन्म देना , दूध पिलाना, आप गीले पर सोना –शिशु को सूखे पर सुलाना, शिशु के बीमार होने पर सारी रात जागना, आप कष्ट सहना, परन्तु बच्चे का कष्ट ना सह सकना –ओह! माँ, तेरे उपकारों का बदला हम कैसे चुका सकते हैं । माँ से बढ़कर कोई प्यार नहीं कर सकता । जो माँ की सेवा नहीं करता, उसकी आज्ञा नहीं मानता, वह मनुष्य कृपा के योग्य नहीं है।</p> <p>-----</p> <p>-----</p> <p>-----</p> <p>-----</p> <p>-----</p> <p>-----</p> <p>-----</p> <p>-----</p> <p>-----</p>	

**KENDRIYA VIDYALAYA AFS, BAGDOGRA**  
**MODEL TEST PAPER PERIODIC TEST-2, 2019-20**

<b>SUBJECT:</b>	<b>ENGLISH</b>		<b>CLASS:</b>	<b>V</b>
<b>TIME:</b>	<b>90MINS</b>		<b>MAX. MARKS:</b>	<b>50</b>

**INSTRUCTIONS:**

1. All questions are compulsory.
2. Write the answer in the space provided in the booklet itself.

NAME: \_\_\_\_\_ SEC: \_\_\_\_\_ ROLL NO: \_\_\_\_\_

INVIGILATOR'S SIGN: \_\_\_\_\_ MARKS OBTAINED: \_\_\_\_\_

EXAMINER'S SIGN: \_\_\_\_\_

**READING****(UNSEEN PASSAGE)**


<b>1.</b>	<b>Read the given passage and answer the following questions.</b>  <b>Bees live in a house that is called a hive. There are three kinds of bees worker, drones and queen. Only one queen bee can live in each hive. If she is lost or dead, the other bees will stop their work. Bees are very wise and busy little creatures. They all join together to build cells of wax for their honey. Each bee takes its proper place and does its own work. Some go out and gather honey from the flowers, other stay at home and work inside the hive. It is not safe for children to handle bees. Bees have a painful sting that they use in their defense.</b>	
<b>a)</b>	<b>Bees lives in a – circle the right one</b> <b>Kennel                      b) hive                      c) stable</b>	<b>1M</b>
<b>b.)</b> <b>Ans</b>	<b>Name of the three kinds of bees who live in a hive?</b> _____	<b>1M</b>
<b>c.)</b> <b>Ans</b>	<b>How many queen bee live in a hive?</b> _____	<b>1M</b>
<b>d.)</b>	<b>Complete the sentence-</b>	

	Bees are very wise and _____ little creatures.	
e.)	Change the gender of the given word.	1M
Ans	Queen-_____	
	<b><u>PROSE AND POETRY</u></b>	
	Answer the following questions-	
1.	When do children go to school in Topsy-Turvy Land?	1M
Ans	_____ _____	
2.	What are the things that the people carry with them, while moving around?	1M
Ans	_____ _____	
3.	Why did the men rush back to the ship ?	2M
Ans	_____ _____ _____	
4.	What are the things that girl does not want to share?	2M
Ans	_____ _____ _____	
5.	Why are the two children nobody's friend?	2M
Ans	_____ _____ _____	
6.	Which mode of the transport do the people use to move around in the city?	2M
Ans	_____ _____	
	<b><u>GRAMMAR</u></b>	
1.	Rearrange the words to make a meaningful sentence. mother Her advises her clean to it .	1M
	_____	
2.	Write the meaning of the given word. Pincer-_____	1M
3.	Correct the use of the describing word in this sentence.	1M



	<b>This is the simpler problem of them all.</b> _____	
<b>4.</b>	<b>Punctuate this sentence.</b> <b>next wednesday my sister mita is going to join the state bank of india</b> _____ _____	<b>1M</b>
<b>5.</b>	<b>Write any two words that end with –less</b> _____	<b>1M</b>
<b>6.</b>	<b>Write the opposite of</b> <b>Lend</b> _____	<b>1M</b>
<b>7.</b>	<b>Write words that rhyme with</b> <b>Train</b> _____	<b>1M</b>
<b>8.</b>	<b>‘I shan’t pinch anyone anymore.’</b> <b>shan’t means</b> _____	<b>1M</b>
<b>9.</b>	<b>Fill appropriate article in the blank.</b> <b>Hari was _____ unpopular boy.</b>	<b>1M</b>
<b>10.</b>	<b>Add –ly to this word and make a meaningful sentence with this word.</b> <b>Clear</b> _____ <b>Sentence :-</b> _____	<b>1M</b>
<b>1.</b>	<b><u>CREATIVE WRITING</u></b>	<b>5M</b>
	<b>Describe how to prepare a garden bed to grow flowers.</b> _____ _____ _____ _____ _____ _____ _____ _____ _____ _____ _____	
<b>2.</b>	<b>Draw the picture of anyone animal that protect itself from its enemies with its outer</b>	<b>5M</b>

cover / shells / quills. Write four sentences about it.




---



---



---



---



---



---



---



---



---



---

<p><b>1.</b></p> <p>a)</p>	<p style="text-align: center;"><b><u>SPELLING</u></b></p> <p>Arrange the jumbled letters to make a meaningful word-</p> <p>1. ASONISTHENMT _____</p> <p>2. LEPESURA _____</p> <p>3. BUSYWA _____</p>	<p>1M</p> <p>1M</p> <p>1M</p>
<p>b)</p>	<p>Encircle the correct spelling-</p> <p>1. Barran                      Barren                      Baren</p> <p>2. Horrad                      Hirrod                      Horrid</p> <p>3. Pincer                      Pincir                      Pencir</p>	<p>1M</p> <p>1M</p> <p>1M</p>
<p>c)</p>	<p>Fill suitable letter in the blanks, to make a meaningful word.</p> <p>1. E _ E _ _ T _ R S</p> <p>2. G _ _ M _ Y</p> <p>3. I _ H _ _ IT _ _ TS</p> <p>4. _ O _ D _</p>	<p>1M</p> <p>1M</p> <p>1M</p> <p>1 M</p>

**HANDWRITING**

**Write the given passage in your beautiful handwriting.**  
**Education is the backbone of a country. Education is like a burning lamp though which one is able to see himself and the world around him. Life becomes valueless without education. Education makes one self-reliant and develops ones self confidence as knowledge is believed to be power.**

---

---

---

---

---

---

---

---

---

---

---

---

---

---

---

---

---

---

---

---

---

---

---

---

---

---

---

—

**KENDRIYA VIDYALAYA AFS BAGDOGRA**  
**PERIODIC TEST-II(2019-20)**

<b>SUBJECT</b>	<b>MATHS</b>		<b>CLASS</b>	<b>5</b>
<b>TIME</b>	<b>90 min.</b>		<b>TOTAL</b>	<b>50</b>

NAME \_\_\_\_\_ ROLL NO \_\_\_\_\_ SECTION \_\_\_\_\_

SIGNATURE OF INVIGILATOR \_\_\_\_\_ MARKS \_\_\_\_\_

SIGNATURE OF EXAMINER : \_\_\_\_\_

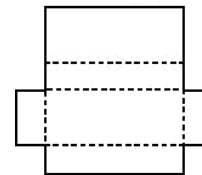
**ALL QUESTIONS ARE MANDATORY**

## Knowledge

Q1	Choose the correct answer from the bracket and fill in the blanks.	
A.	The place value of underlined digit in 63. <u>4</u> 08 is _____.(1)	1
B.	The unit of volume is _____ (square unit, cubic unit)	1
C.	Cube is a _____. (2d shape, 3d shape)	1
D.	43.258 X 0 = _____.	1
E.	The sum of the lengths of all sides of a closed shape is known as _____.	1
F.	Area of rectangle = _____ X _____ sq. Unit	1

Q2

Draw the 3-dimensional shape for the given net. (2)

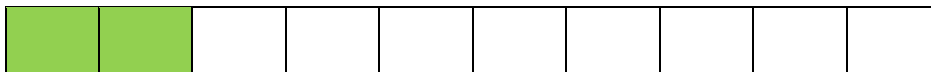


2

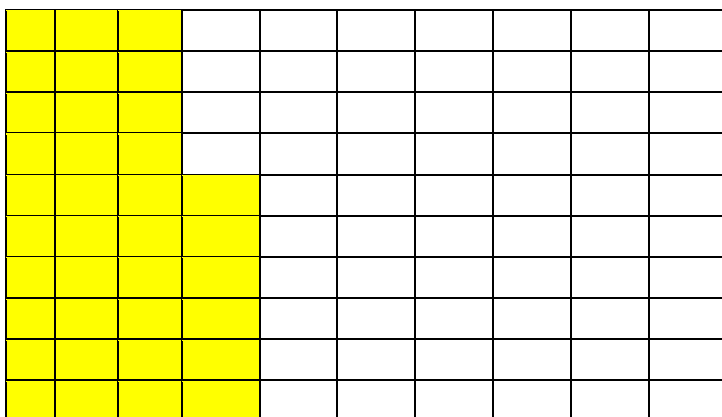
Q-3

Write the Decimal Number of the shaded part:

a)



\_\_\_\_\_



\_\_\_\_\_

2

Q-4

1. From the table, name the winners: (2)

Rathi	4.00 m
Reena	4.05 m
Raji	4.15 m
Renu	4.50 m
Rekha	3.75 m
Radha	3.95 m
Rani	4.20 m

**Winners**

I \_\_\_\_\_

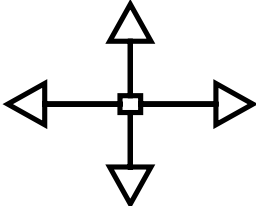
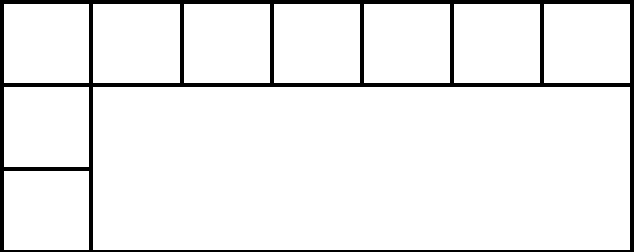
II \_\_\_\_\_

III \_\_\_\_\_

IV \_\_\_\_\_

4

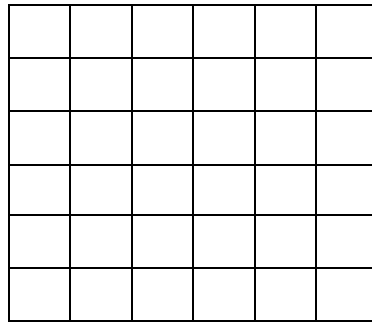
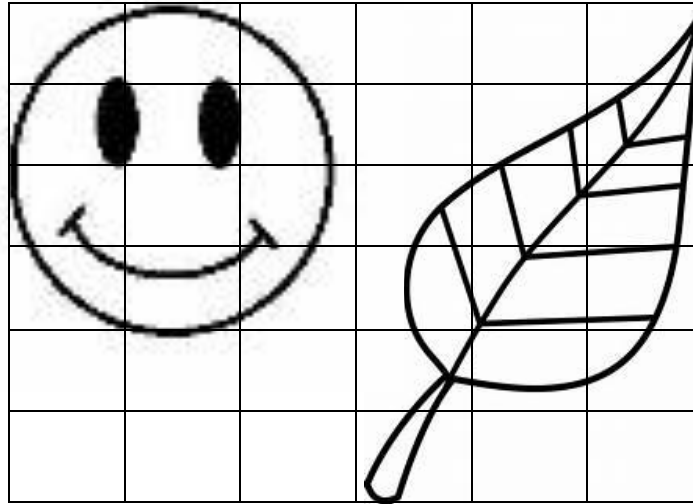
## UNDERSTANDING

Q-5	Draw a shape that can be folded to make an open box –	1
Q-6	Write the name of mainly four direction.  	1
Q-7	1 cm= _____ mm	1
Q-8	Cuboid is a _____ (2D/3D) Figure	1
Q-9	If the area of one box is 1 Square cm, then find the Area of the given (2) figure:  	2

Q-10


Here are some picture drawn on a 2 cm square grid. Try making the same picture on a 1 cm grid.

2



Q-11

Look at the Bar chart and answer the following:



1. Which of the two students get the same mark?
2. What is the mark of Somu?
3. What is the mark of kuma?
4. What is the difference between marks of Sekar and Ravi?

1

1

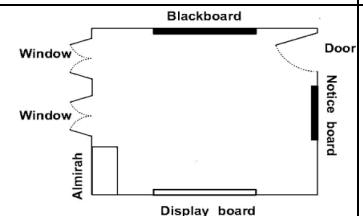
1

1



## Ability to compute

	<b><u>Ability to compute</u></b>	
Q-12	<b>Fill the blank-</b> <b>Rupee <math>\frac{1}{4}</math> = _____paise.</b>	1
Q-13	<b>Complete the given multiplication:</b> $\begin{array}{r} \phantom{0}4\phantom{0}2\phantom{0}3 \\ \times \phantom{0}1\phantom{0}2\phantom{0}5 \\ \hline \phantom{0}2\phantom{0}1\phantom{0}1\phantom{0}\square \\ \phantom{0}8\phantom{0}\square\square\square \\ \hline \phantom{0}4\phantom{0}2\phantom{0}3\phantom{0}0\phantom{0} \end{array}$	1
Q-14	<b>Calculate the area of a square. It's length of one side is 6 M.</b>	1
Q-15	<b>Look at the picture and answer (2) The following:</b> <p>a. Which is exactly opposite to black Board?</p> <p>b. If you enter in the classroom, the notice board is at your _____ side?</p>	1



Q-16	Leena's aunty brought a present for her from China. It cost 50 Yuan. Find what it costs in Indian rupees if 1 yuan is equal to 5.50 rupees.	2																									
Q-17	<p>Complete the table using Tally Marks:</p> <table border="1" data-bbox="321 772 1247 1157"> <thead> <tr> <th>Game</th> <th>No. of students</th> <th>Tally Marks</th> </tr> </thead> <tbody> <tr> <td>Basket ball</td> <td>20</td> <td></td> </tr> <tr> <td>Volley ball</td> <td>5</td> <td></td> </tr> <tr> <td>Tennis</td> <td>30</td> <td></td> </tr> <tr> <td>Foot ball</td> <td>20</td> <td></td> </tr> </tbody> </table>	Game	No. of students	Tally Marks	Basket ball	20		Volley ball	5		Tennis	30		Foot ball	20		2										
Game	No. of students	Tally Marks																									
Basket ball	20																										
Volley ball	5																										
Tennis	30																										
Foot ball	20																										
Q-18	<p>Sanya, Aarushi, Manav and Kabir made greeting cards. Complete the table for their cards:</p> <table border="1" data-bbox="261 1289 1469 1696"> <thead> <tr> <th>Whose card</th> <th>Length</th> <th>Breadth</th> <th>Perimeter</th> <th>Area</th> </tr> </thead> <tbody> <tr> <td>Sanya</td> <td>8 CM</td> <td>5 CM</td> <td></td> <td></td> </tr> <tr> <td>Aarushi</td> <td>10 M</td> <td>12 M</td> <td></td> <td></td> </tr> <tr> <td>Manav</td> <td>6 CM</td> <td></td> <td>20 CM</td> <td></td> </tr> <tr> <td>Kabir</td> <td></td> <td>4 M</td> <td></td> <td>36 square M</td> </tr> </tbody> </table>	Whose card	Length	Breadth	Perimeter	Area	Sanya	8 CM	5 CM			Aarushi	10 M	12 M			Manav	6 CM		20 CM		Kabir		4 M		36 square M	4
Whose card	Length	Breadth	Perimeter	Area																							
Sanya	8 CM	5 CM																									
Aarushi	10 M	12 M																									
Manav	6 CM		20 CM																								
Kabir		4 M		36 square M																							

## Problem Solving Ability

Q-19

Length of anything is measured in kilograms (true/false).

1

Q-20

If weight of ● = 10 grams, then what will be the weight of a book is equal to

●●●●●●●●

Weight of book = \_\_\_\_\_ grams.

1

Q-21

Look the rectangle. area and length is already given so calculate the breadth-

length – 6 CM

**AREA – 24  
square CM**

Breadth is \_\_\_\_\_ CM

1

Q-22

Keep the decimal point in the correct place and find the total:






Number of denominations					Amount
₹ 50	x	5	=	₹	250 00
₹ 10	x	20	=	₹	200 00
₹ 2	x	30	=	₹	60 00
₹ 1	x	40	=	₹	40 00
				Total	= ₹ <u>          </u> <u>          </u>

1

Q-23

Count the tally marks and write the number against each game in the table and also answer the following questions. (4)

2

Indoor games	Tally marks	Number
Dice 	□ □ □ □	
Chess 	□ □ □ □ L	
Billiards 	□ □ □ □ □ U	
Puzzle 	□ □ □ □	
Carrom 	□ □	

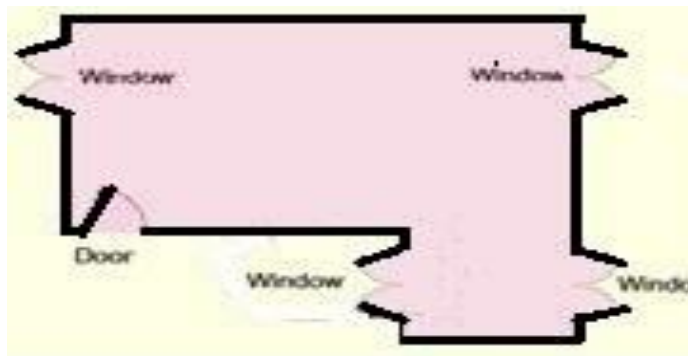
a) What is the total number of students?

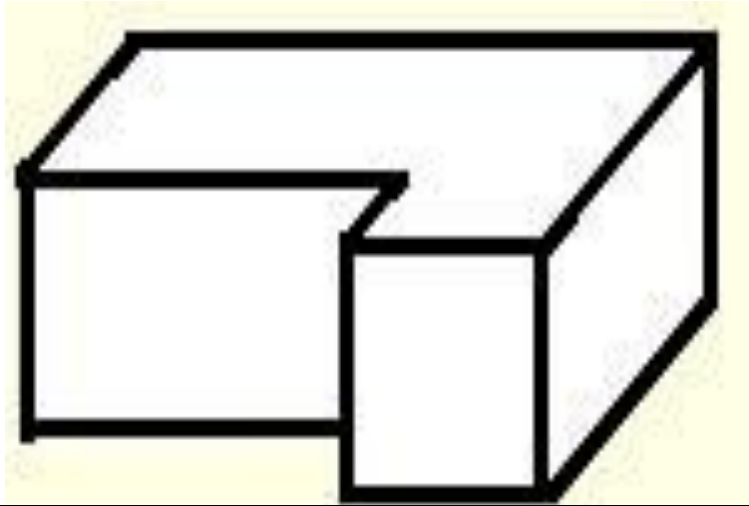
b) Which is the most favoured indoor game in this table?

Q-24

look at this floor map of a house. Make doors and windows on the deep drawing of this house.

2





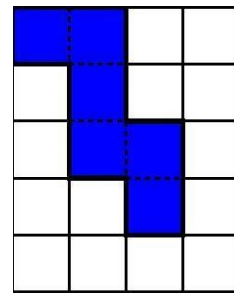
Q-25

Solve these

a) if a square paper has a parameter of 16 cm, then its side is?

B) Sonia decorated her saree in all side with lace of length 13m. What is the perimeter of the saree?

c) What is the area of the given shape?



4