

KENDRIYA VIDYALAYA AFS BAGDOGRA

AUTUMN BREAK ASSIGNMENT

CLASS - VI

SUBJECT: MATHEMATICS

1. In a test, marks by 40 marks tally

8	1	3	7	6	5	5	4	4	2
4	9	5	3	7	1	6	5	2	7
7	3	8	4	2	8	9	5	8	6
7	4	5	6	9	6	4	4	6	6

Mathematics the following were obtained students. Arrange these in a table using marks.

(a) Find how many students obtained marks equal to or more than 7.

(b) How many students obtained marks below 4?

2. Following is the choice of sweets of 30 students of Class VI.

Ladoo, Barfi, Ladoo, Jalebi, Ladoo, Rasgulla, Jalebi, Ladoo, Barfi, Rasgulla, Ladoo, Jalebi, Jalebi, Rasgulla, Ladoo, Rasgulla, Jalebi, Ladoo, Rasgulla, Ladoo, Ladoo, Barfi, Rasgulla, Rasgulla, Jalebi, Rasgulla, Ladoo, Rasgulla, Jalebi, Ladoo.

(a) Arrange the names of sweets in a table using tally marks.

(b) Which sweet is preferred by most of the students?







3. Catherine threw a dice 40 times and noted the number appearing each time as shown below :

1	3	5	6	6	3	5	4	1	6
2	5	3	4	6	1	5	5	6	1
1	2	2	3	5	2	4	5	5	6
5	1	6	2	3	5	2	4	1	5

Make a table and enter the data using tally marks. Find the number that appeared.

- (a) The minimum number of times
- (b) The maximum number of times
- (c) Find those numbers that appear an equal number of times.

4. Following pictograph shows the number of tractors in five villages.










Village	Number of tractors  - 1 tractor
Village A	
Village B	
Village C	
Village D	
Village E	

and

Observe the pictograph answer the following questions.

- (i) Which village has the minimum number of tractors?
- (ii) Which village has the maximum number of tractors?
- (iii) How many more tractors village C has as compared to village B.
- (iv) What is the total number of tractors in all the five villages?

5. The number of girl students in each class of a co-educational middle school is depicted by the pictograph :

Class	Number of girl students  - 4 girls
I	
II	
III	
IV	
V	
VI	
VII	
VIII	

this









Observe

pictograph and answer the following questions :

- (a) Which class has the minimum number of girl students?

- (b) Is the number of girls in Class VI less than the number of girls in Class V?
- (c) How many girls are there in Class VII?

6. The sale of electric bulbs on different days of a week is shown below :

Day	Number of electric bulbs  - 2 bulbs
Monday	
Tuesday	
Wednesday	
Thursday	
Friday	
Saturday	
Sunday	

the








Observe

pictograph and answer the following questions :

- (a) How many bulbs were sold on Friday?

- (b) On which day were the maximum number of bulbs sold?
- (c) On which of the days same number of bulbs were sold?
- (d) On which of the days minimum number of bulbs were sold?
- (e) If one big carton can hold 9 bulbs. How many cartons were needed in the given week?

7. In a village six fruit merchants sold the following number of fruit baskets in a particular season :

Name of fruit merchant	Number of fruit baskets  - 100 fruit baskets
Rahim	
Lakhanpal	
Anwar	
Martin	
Ranjit Singh	
Joseph	

Observe
and
following
(a) Which
sold the

this
pictograph
answer the
questions :
merchant
maximum

number of baskets?

(b) How many fruit baskets were sold by Anwar?

(c) The merchants who have sold 600 or more number of baskets are planning to buy a godown for the next season. Can you name them?

Holiday Homework

SST class VI

History

1. What was Ashoka's Dhamma? What was its Principle?
2. Write a short note to describe the Mauryan people.
3. How was Ashoka unique?

Geography

1. Locate the continents of the world on outline map and give details of any two continents.
2. What are the Major domains of the earth explain.
3. Write about the major oceans of the World? Also locate on world map.

Civics

1. Read the chapter 6 Rural Administration.

* Make learner diary of chapter of the following

History chapter 7&8

Geo -5&6

Civics -6&7

KV AFS BAGDOGRA

AUTUMN BREAK HOMEWORK 2021-22

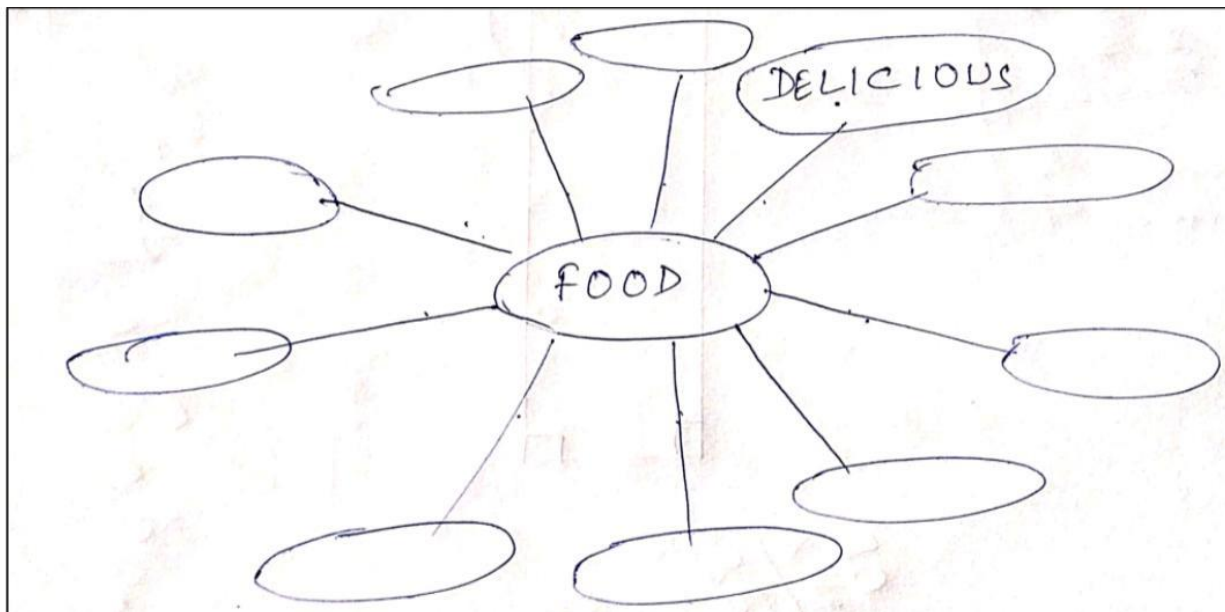
CLASS VI

ENGLISH

MDP

WRITE 10 ADJECTIVES RELATED TO FOOD IN THE GIVEN WEB CHART.

THE FIRST ONE HAS BEEN DONE FOR YOU.



NOTE: DO THIS IN AN A4 SHEET.

ATTACH THE SHEET TO YOUR MDP FILE.

YOU UNDERSTAND THE VALUE OF HEALTHY EATING. SO, WRITE THE RECIPE OF A HEALTHY SALAD.

WRITE A MEANINGFUL STORY IN YOUR OWN WORDS IN WHICH THE CHARACTERS ARE FOOD ITEMS. WRITE MORAL OF YOUR STORY.

NOTE: DO THIS IN AN A4 SHEET.

ATTACH THE SHEET TO YOUR MDP FILE.

WRITE THE POEM "VOCATION" IN YOUR NOTE BOOK AND WRITE A PARAGRAPH (80 WORDS) ON THE POET.

READ THE NEXT TWO CHAPTERS FROM HONEY SUCKLE AND THE SUPPLEMENTARY READER. UNDERLINE THE DIFFICULT WORDS AND FIND OUT THEIR MEANINGS FROM THE DICTIONARY.

CLASS 6

AUTUMN BREAK HOMEWORK

SCIENCE(2021-22)

Q1. Name the food needed:

for strong bones and teeth

to prevent scurvy

to avoid constipation

for warmth

for growth.

Q2. What is malnutrition? What are its harmful effects?

Q3. Nima while helping her mother washing the vegetables was wondering why her science teacher told that these vegetables are actually fruits. She then asked her father. Her father explained this with the help of internet.

(a) Name some vegetables which are actually fruits of the plants.

(b) Name some seed eaten as food by us.

(c) What quality of Nima is shown here?

Q4. Which country is the largest producer of jute? Why are cotton and woollen clothes rough whereas silk, rayon, nylon and polyester smooth to touch?

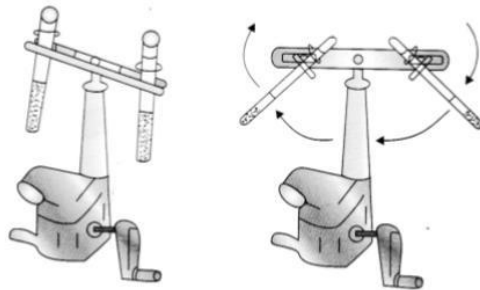
Q5.



1 2 3

Identify the objects given in the above pictures on the basis of transparency.

Q7. Identify the machine given in the picture below. What is the use of this machine?



Q8. What are the differences between reversible changes and irreversible changes?

Q9. Classify the following as reversible or irreversible changes:

- (i) Growth of a plant
- (ii) Ploughing a field,
- (ii) Melting of wax
- (iv) Falling of rain
- (v) Pulling of rubber string
- (vi) Breaking of a glass rod
- (mi) Cooking of food.

Q10. Look carefully at the plants shown in following figure and identify their type. Are they herbs, shrubs or trees? Are they similar in shape? Which category has the biggest plants and which has the smallest?



Q11. Draw a labelled diagram of a ball and socket joint.

गृह कार्य हिंदी

कक्षा:6

1. वसंत भाग-1 , के पाठ 1,2,3 के शब्दार्थ एवम प्रश्न उत्तर याद कीजिए।
2. पाठ 4,5,6 पाठों से 10-10 कठिन शब्द अपनी कॉपी में लिखिए और और उनपर दो दो वाक्य बनाएं।
3. संज्ञा या सर्वनाम कि सी भी एक विषय पर चार्ट तैयार कीजिए ।

4. पेड़,पौधे,नदी,पर्वत में से किसी एक विषय पर 8 पंक्ति की कविता लिखें।
- 5) प्रत्येक सोमवार व शक्रु वार को बालराम कथा से किसी एक पाठ परिवार में चर्चा कीजिये।
- 6)निम्न विषयों पर किसी एक विषय पर निबंध लिखें(शब्द सीमा 100 शब्द)

क - कोरोना का बि गड़ता स्वरुप और बचाव के उपाय

ख - मेरा प्रिय खेल

ग - पर्यावरण प्रदूषण कारण और उपाय

सभी बच्चों को अवकाश की शभु कामनाएं।

धन्यवाद !

केन्द्रीय विद्यालय वायुसेनास्थल बागडोगरा

शरदकालीन अवकाश गृहकार्यम्

कक्षा - षष्ठी (6th)

सत्रम् - 2021 - 2022

विषयाध्यापक का नाम - कवीन्द्र कुमार कविजी पद - टी. जी. टी. (संस्कृत

1. शब्दरूप - (क) अकारान्त (पुं.) बालक (ख) इकारान्त (पुं.) मुनि
(ग) आकारान्त (स्त्री.) बालिका (घ) अकारान्त (नपुं.) पुष्प लिख कर याद करें
।

2. संस्कृत छात्र प्रतिज्ञा लिख कर याद करें ।

3 सूक्तिस्तबकः (पाठ 8th) के सभी श्लोक अर्थ सहित लिख कर याद करें ।

4. पठ् (पढना) धातु रूपाणि सभी लकारों में लिख कर याद करें ।

