

Code no.A	Total
	pages.12

**KENDRIYA VIDYALAYA AFS,BAGDOGRA
ANNUAL EXAM (2018-19)**

SUBJECT	EVS	CLASS	V
TIME	120 MINUTES	MARKS	80

INSTRUCTIONS:


- 1.All questions are compulsory.
2. Write the answer in the space provided in the booklet itself.


NAME-----SEC-----ROLL NO-----
--




MARKS OBTAINED -----
--

Signature of invigilator----- Signature of examiner-----
--

OBSERVATION

Q1.	Observe the picture and write their name.	Marks
a.		1M
b.		1M

	 <p style="text-align: center;">_____</p>	
--	---	--

<p>c</p>	 <p style="text-align: center;">_____</p>	<p>1M</p>
<p>d.</p>	 <p style="text-align: center;">_____</p>	<p>1M</p>
<p>e.</p>	 <p style="text-align: center;">_____</p>	<p>1M</p>
<p>f.</p>		<p>1M</p>



g



1M

h




1M

i



1M

j.		1M
Q 2	Answer the following questions.	
a. Ans.	<p>Name two musical instrument that produce sound on the blowing air.</p> <p>-----</p> <p>-----</p>	2M
b Ans.	<p>Why do people do different kinds of job?</p> <p>_____</p>	2M

	<p>_____</p> <p>-----</p> <p>-----</p>	
C. Ans	<p>In Khedi village ,what art did children learn?</p> <p>-----</p> <p>-----</p> <p>-----</p> <p>-----</p> <p>-----</p> <p>-----</p> <p>-----</p> <p>-----</p> <p>-----</p>	2M

	<p>----- ----- ----- -----</p>	
<p>d. Ans.</p>	<p>What is Undhiya? How is it made?</p> <hr/> <p>----- ---- ----- ---- ----- ---- ----- ---- ----- ---- ----- ---- ----- ---- ----- ---- ----- ----</p>	<p>2M</p>
<p>e. Ans.</p>	<p>What do you understand by Adivasis ?</p> <p>----- ----- ----- -----</p>	<p>2M</p>

	<hr style="border-top: 1px dashed black;"/> <hr style="border-top: 1px dashed black;"/> <hr style="border-top: 1px dashed black;"/> <hr style="border-top: 1px dashed black;"/> <hr style="border-top: 1px dashed black;"/> <hr style="border-top: 1px dashed black;"/> <hr style="border-top: 1px dashed black;"/> <hr style="border-top: 1px dashed black;"/> <hr style="border-top: 1px dashed black;"/> <hr style="border-top: 1px dashed black;"/>	
--	---	--

b) Observe the pictures and write the journey of Bajra seed from field to plate?

5M



Ans

<p>•</p>	<hr style="border-top: 1px dashed black;"/> <hr style="border-top: 1px dashed black;"/> <hr style="border-top: 1px dashed black;"/> <hr style="border-top: 1px dashed black;"/> <hr style="border-top: 1px dashed black;"/> <hr style="border-top: 1px dashed black;"/>	
----------	---	--

	<p>-----</p> <p>-----</p> <p>-----</p> <p>-----</p> <p>-----</p> <p>-----</p> <p>-----</p> <p>-----</p> <p>-----</p>	
--	--	--

	IDENTIFICATION	
--	-----------------------	--

Q1	Encircle the odd one.	
	a. Car Bus Bicycle	1M
	b. Donga khatamband Houseboat	1M
	c. Flood Kutch Tsunami	1M
	d. Flute Mouthorgan Drum	1M

Q2	Write true or false.	
	a. People do different works to earn money. _____	1M
	b. The Sabarmati ashram located at Assam. _____	1M
	c. Polio is not a hereditary disease. _____	1M

Q3	Fill in the blanks.	
		1M

a.	Jatrya was born in _____ village. (Khedi/ Simduri)	1M
b.	The smoke and smell of burning _____ was terrible.(cloth/tyre)	1M
c.	Mukadam is an agent for _____ factories.(bottle/sugarcane)	
Q4	Answer the following question.	
a)	<p>What do you understand by 'Earthquake.'?</p> <p>Ans</p> <p>-----</p> <p>-----</p> <p>-----</p> <p>-----</p>	2M
b.	<p>Why do we blow on the hot Potatoes ?</p> <p>Ans</p> <p>-----</p> <p>-----</p> <p>-----</p> <p>-----</p>	2M
c	<p>Write any four jobs that you like to do ?</p> <p>Ans</p> <p>-----</p> <p>-----</p>	2M
d.	<p>What is Torang ?</p> <p>Ans</p> <p>-----</p> <p>-----</p>	2M

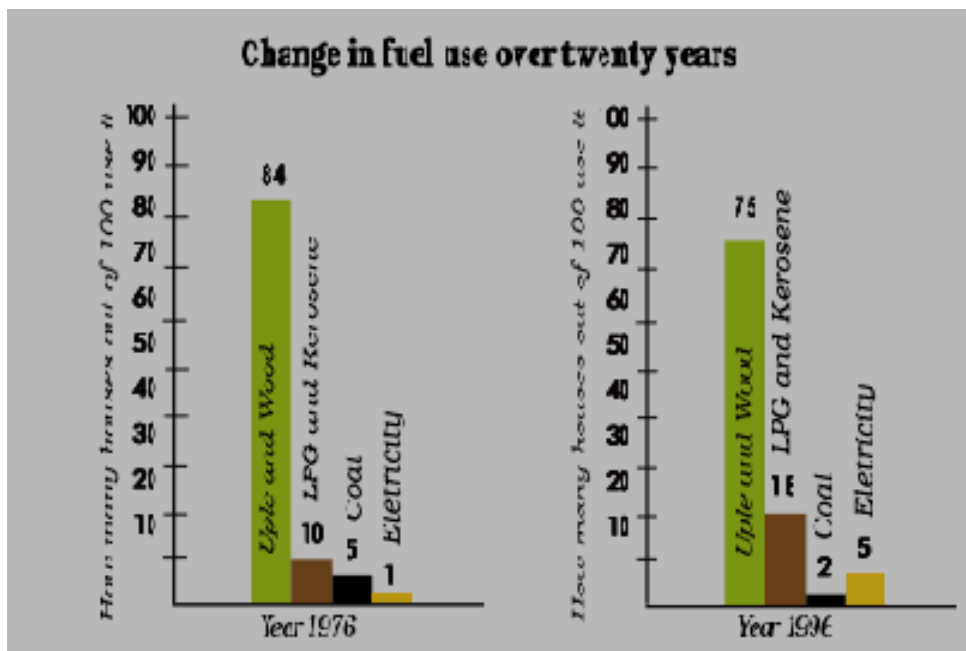
e. Write the name of two things made out of Bamboo and also draw the picture.?

2M

Ans

Q5 Look at this bar graph carefully and answer the following questions.

5M



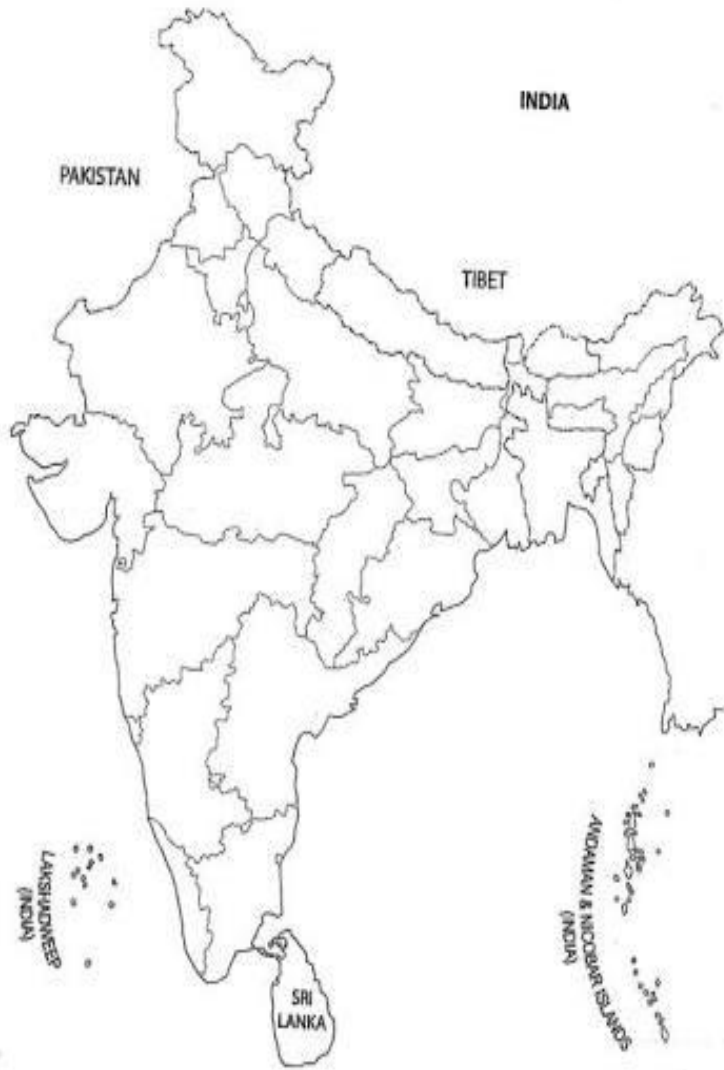
<p>a.</p> <p>Ans</p> <p>b</p> <p>Ans</p> <p>c</p> <p>Ans</p> <p>d</p> <p>Ans</p> <p>e</p>	<p>In year 1976, out of 100 how many houses used uple and wood?</p> <p>-----</p> <p>Which was the fuel used the least in 1976?</p> <p>-----</p> <p>Out of 100 how many houses were using Electricity in 1996?</p> <p>-----</p> <p>Which fuel was used the least in 1996?</p> <p>-----</p> <p>In 1976,LPG and kerosene were used in _____ houses.</p>	
DISCOVERY OF FACTS		
<p>Q1</p> <p>a)</p> <p>b)</p> <p>c)</p> <p>d)</p> <p>e)</p>	<p>Fill in the blanks with the correct answer.</p> <p>Adalaj stepwell is about _____ from Ahmedabad.(18km/20km)</p> <p>_____gets very Little rainfall.(Lebong/ ladakh`)</p> <p>Polio is caused by a_____ (Hereditary/virus)</p> <p>_____are affected when a person suffer from polio.(legs/ stomach)</p> <p>When there is no _____, there is no work on the field.(rain/food)</p>	<p>1M</p> <p>1M</p> <p>1M</p> <p>1M</p> <p>1M</p>

Q2	Answer the following questions.	
a) Ans	What is lekha ? <hr/> <hr/> <hr/>	3M
b) Ans	Write three benefits of playing sports? <hr/> <hr/> <hr/> <hr/> <hr/> <hr/>	3M

c) Ans.	Why do the poor people in towns collect rubber tyres? <hr/> - <hr/> - <hr/> -	3M
------------------------------	--	-----------

	----- -	
d)	Who are Identical twins?	3M
Ans.	----- - ----- - ----- - ----- -	
e)	Who was Mukadam?	3M
Ans .	----- - ----- -	
Q3	<p>On the outline map of India locate the following states.</p> <p>a) Jharkhand and Orrisa.</p> <p>b) Two states with thick forest.</p> <p>1)----- 2) -----</p> <p>c) Two states with sea on one side.</p> <p>1) ----- 2) -----</p> <p>d) Two states with thin forest.</p> <p>1)----- 2) -----</p> <p>e) Two states from north east (seven sisters)</p> <p>1) ----- 2) -----</p>	

Ans.



KENDRIYA VIDYALAYA AFS, BAGDOGRA
ANNUAL EXAMINATION, 2018-19

SUBJECT:	ENGLISH		CLASS:	V
TIME:	2 HOURS		MAX. MARKS:	80

INSTRUCTIONS:

- 1. All questions are compulsory.**
- 2. Write the answer in the space provided in the booklet itself.**

NAME: _____ SEC: _____ ROLL NO: _____

INVIGILATOR'S SIGN: _____ MARKS OBTAINED: _____

EXAMINER'S SIGN: _____

READING**(UNSEEN PASSAGE)**

- 1. Read the passage and answer the following questions given below-**

A boy was very fond of almonds. So, his mother always gave him a few almonds to eat. The boy always asked her for more almonds. Every time the mother would say, "No, my dear, not so many at a time. If you eat too many, you will get pain in your stomach."

The stern voice of his mother made the boy quiet. But he never felt that what she said was right. One day the boy was alone in the house. His mother had gone to the market. The managed to get the jar of almonds there was no one to stop him eating that day. So he ate as many almonds as he could.

When his mother was not there. He started feeling pain in stomach. But nobody was there to take care of him.

His mother after 2 hours came back from the market. She saw her son in pain. She asked to her son 'what happened son what happened...?'

a)	Which thing was the boy very fond of?	1M
Ans	_____	
b)	What did the boy always feel?	1M
Ans	_____	
c)	What the boy did one day?	1M
Ans	_____	
d)	Why did his mother always stop to eat?	1M
Ans	_____	
e)	Where had his mother gone one day?	1M
Ans	_____	
f)	Write the past form of-	1M
Ans	Ask- _____	
g)	Write the opposite of the given-	1M
Ans	Many- _____	
h)	Write one action word from the passage-	1M
Ans	_____	
i)	Write one naming word from the passage-	1M
Ans	_____	
j)	Make any two meaningful words using the letters from MOTHER-	1M
Ans	_____, _____	

(SEEN PASSAGE)

2.	<p>Read the passage and answer the following questions given below-</p> <p>Suddenly the train slowed down as a herd of buffaloes charged across the railway track. The train was forced to stop till the procession passed like a great brown river. The herd took a full three hours to cross the tracks. Night had fallen by the time the train could move again.</p> <p>The train headed for the steep mountains. This was the most difficult part of the journey with its winding roads. They passed the highest point of their</p>	
----	--	--

	<p>journey. 7524 feet above sea level. In a few hours they would be out of the Rocky Mountain.</p> <p>After the passengers had taken their breakfast the train gave a shrill whistle and braked with a jerk and came to a halt. Passepartout, a French passenger went to see what the matter was. There was nothing to be seen. The train had halted in the middle of nowhere. There was no station in sight.</p>	
a)	Why did the train slow down all of a sudden?	1M
Ans	_____	
b)	When did it move again?	1M
Ans	_____	
c)	What did the procession consist of?	1M
Ans	_____	
d)	How did the crowd of buffaloes appear?	1M
Ans	_____	
e)	How long did it take for the herd to cross the tracks?	1M
Ans	_____	
f)	What was the most difficult part of the journey?	1M
Ans	_____	
g)	What was the highest point in their journey?	1M
Ans	_____	
h)	What is the past form of the given word-	1M
Ans	Head - _____	
i)	Group of the buffaloes also called-	1M
Ans	_____	
j)	write the opposite of the given word-	1M
Ans	Highest- _____	
	<u>PROSE AND POETRY</u>	
	Answer the following questions-	
1.	Who was Gulliver?	1M
Ans		

	<hr/> <hr/>	
2. Ans	Why did the captain send the men to the land? <hr/> <hr/>	1M
3. Ans	What are the things the girl does not want to share? <hr/> <hr/>	1M
4. Ans	Which modes of transport do the people use to move around in the city? <hr/> <hr/>	1M
5. Ans	Where have you seen crowd of people? <hr/> <hr/>	1M
6. Ans	Why does the two children nobody's friend? <hr/> <hr/> <hr/>	2M
7. Ans	Why did all the children hate Hari? <hr/> <hr/> <hr/>	2M
8. Ans	Why do you think all the people in the poem "sing a song of people" are in a hurry? <hr/> <hr/>	2M
9. Ans	How many days would it take for the train to reach New York? <hr/> <hr/>	2M
10. Ans	Which tribe of Red Indians attacked the travellers? <hr/>	2M

GRAMMAR

	<hr/> <hr/>	
1.	Fill in the blanks- His feet were as cold_____.	1M
2.	Write the plural of the given word- He - _____	1M
3.	Write the opposite of the given- Nobody - _____	1M
4.	Add 'ment' to make new meaningful word- Judge - _____	1M
5.	Write the meaning of the given word- Grumpy - _____	1M
6.	Add 'less' to the given words- friend- _____, home - _____	1M
7.	Write one describing (adjective) word- _____ Malu	1M
8.	Add 'ly' to make new word and fill in the blank- Let us sing _____. (soft)	1M
9.	Write full form of the given- Wouldn't- _____	1M
10.	Write the rhyming word of the given- Share- _____	1M
11.	Underline the no word in the given sentence- None of the two boys came.	1M
12.	Write the thing whose sound or action is in the given word- Braking! _____	1M
13.	Write the meaning of the given words in English- Thouro! Thouro! - _____	1M
14.	Fill in the blank choosing correct word- The _____ sang that song beautifully. (choir/chump)	1M

1.	<u>SPELLING</u>	
	Arrange the jumbled letters to make a meaningful word-	
a)	i) T H N I N U O G - _____	1M
	ii) R V I E R - _____	1M
	iii) R B C A - _____	1M
	iv) S G E G- _____	1M
	v) N B D O Y O- _____	1M
b)	Encircle the correct spelling-	
	i) Arived arrived arriwed	1M
	ii) Buffaloes baffaloes bufaloes	1M
	iii) Childran children childron	1M
	iv) Dogen dojen dozen	1M
	v) Travels travells trevels	1M
1.	<u>HANDWRITING</u>	5M
	<p>A milkman became very wealthy through dishonest means. He had to cross a river daily to reach the city where his customers lived. He mixed the water of the river generously with the milk that he sold for a good profit. One day he went around collecting the dues in order to celebrate the wedding of his son. With the large amount thus collected he purchased plenty of rich clothes and glittering gold ornaments. But while crossing the river the boat capsized and all his costly purchases were swallowed by the river. The milk vendor was speechless with grief. At that time he heard a voice that came from the river, “Do not weep. What you have lost is only the illicit gains you earned through cheating your customers.</p>	

SIGNATURE OF INVIGILATOR

SIGNATURE OF EXAMINER

Instructions: ALL QUESTIONS ARE COMPULSORY.

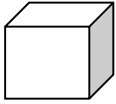
KNOWLEDGE

VSA

1

Tick the Cuboid shape.

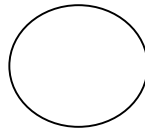
a.



b.



c.



1M

2

How long is this pencil?



Ans: _____ .

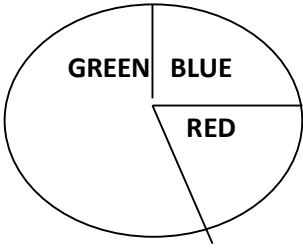
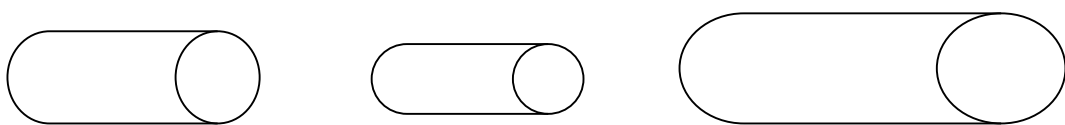
1M

3

Circle the correct option to write the area of total land of a city.

Square cm/ Square m/ Square km

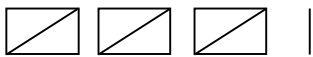
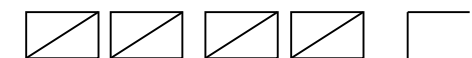
1M

4	<p>Colour the biggest part.</p> 	1 M
5	<p>Find out the product.</p> <p>$20 \times 0 = \underline{\hspace{2cm}}$.</p>	1M
6	<p>How many grams?</p> <p>$9 \text{ kg} = \underline{\hspace{2cm}} \text{ g}$</p>	1M
7	<p>Convert the following</p> <p>$3 \text{ m and } 50 \text{ cm} = \underline{\hspace{2cm}} \text{ m.}$</p>	1M
8	<p>Fill in the blanks.</p> <p>The boundary of square = $4 \times \underline{\hspace{2cm}}$.</p>	
9	<p>Write the quotient of the given sum.</p> <p>$95 \div 5 = 19$. Quotient = $\underline{\hspace{2cm}}$.</p>	1M
10	<p>Shade the pipe which fills more?</p> 	1M
	SA	
11	<p>Find out the volume of cube which has the side = 7 cm.</p>	2M
12	<p>Look for the pattern and take this forward.</p> <p>$(0 \times 9) + 1 = 1$</p> <p>$(1 \times 9) + 2 = 11$</p> <p>$(12 \times 9) + 3 = \underline{\hspace{2cm}}$</p>	2M

$$(123 \times 9) + 4 = \underline{\hspace{2cm}}$$

13

Complete the table.


Animal	Tally marks	Number
Cats		<u> </u>
Dogs		<u> </u>
Cows		18
Goats		10

2M

14

Find out the area of designs. Remember a triangle is equal to half square.

2M



a

b

Area of design a = square cm

Area of design b = square cm

15

Match these.

2M

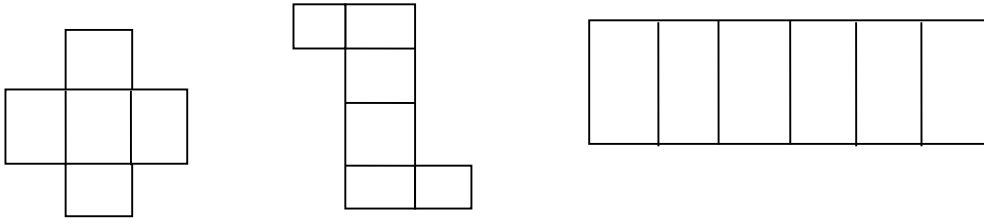
a	9/100	0.1
b	1/1000	0.09
c	1/10	0.009
d	9/1000	0.001

VSA

16

Tick the shape which folds into a open box.

1M



17

Colour the 0.2 part of this rectangle.

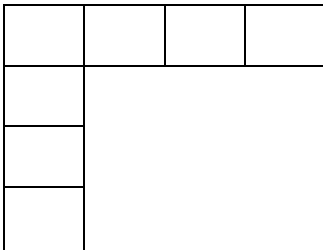
1M



18

The boundary of piece A = _____ cm.

1M



19

Helping Hands- Complete the table

1M

Help most in house work	Number of children
Going to the market	47
Washing utensils	15
Washing clothes	3
Making, serving food	25
Cleaning the house	10
Total children who said they help their parents	

20

Find out the answer.

1M

$100 \div 10 = \underline{\hspace{2cm}}$.

21

If the volume of 1 marble is equal to 5 ml then the volume of 4 marbles is equal to how many ml?

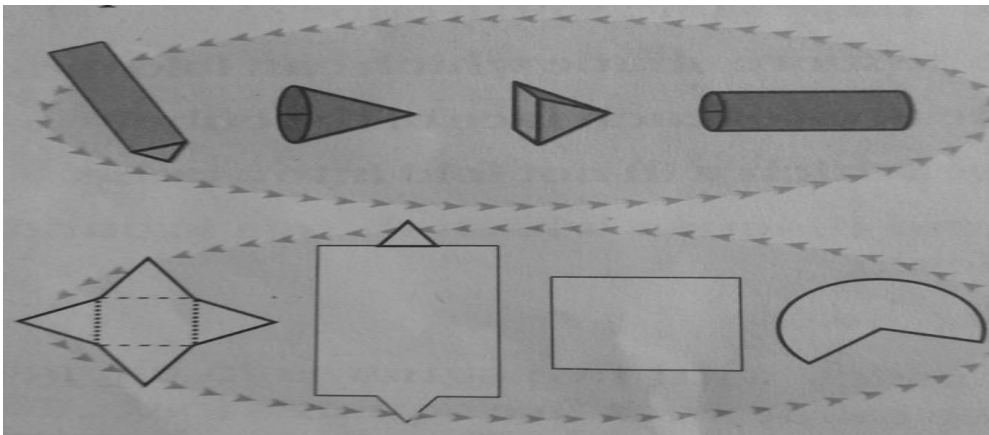
_____.

1M

SA

22

All boxes are not cubes. Here are some different kinds of boxes. Match each shape below with a box into which it will fold.



2M

23

Karan went shopping with Rs 200. Look at the bill. The shopkeeper forgot to put the point correctly in the prices. Put the point in the correct place and find out the total amount of bill.

2M

Item	Quantity	Price (Rupees)
Soap	1	1 2 5 0
Green gram	1 kg	5 0 2 5
Tea	250 gm	2 7 2 5
Coconut Oil	1 Litre	6 0 0 0
	Total	

24

A square carrom board has a perimeter of 320 cm. How much is its area?

2M


25 A 2 rupee coin weighs 6g. What is the weight of the sack with

(a) 2200 coins? _____ kg ____ g

(b) 3000 coins? _____ kg ____ g.

2M

26



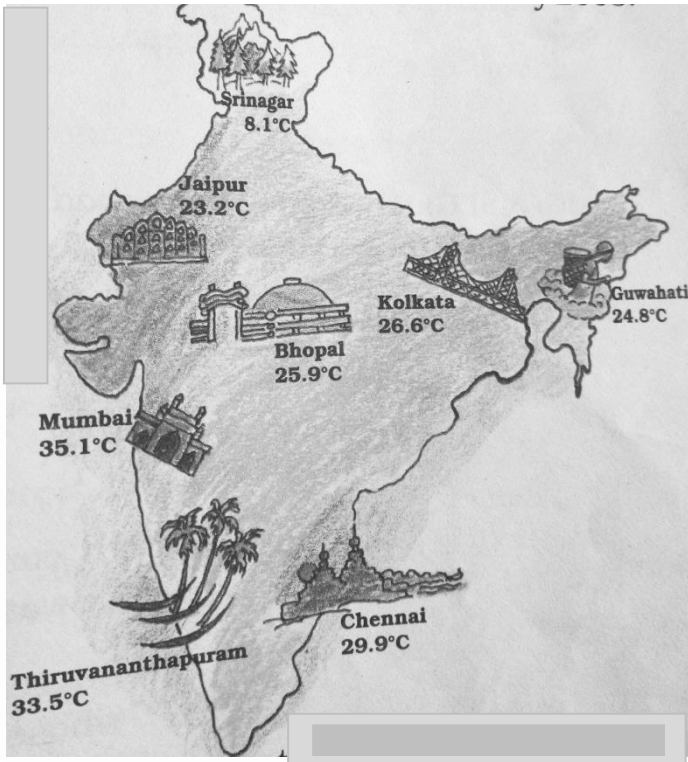
Make drawings to show how this bridge will look

a) From the Top

b) From the Side

2M

LA



The temperature in each city was noted at 3 pm on 16 February 2017.

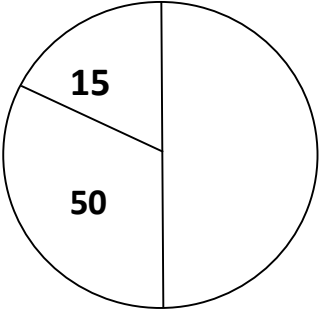
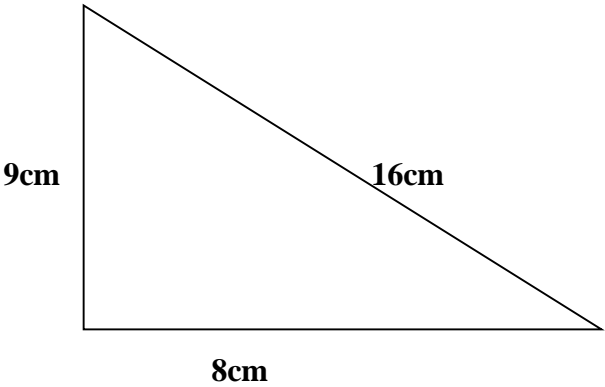
- 1) Which place had the highest temperature at 3 pm?
_____.
- 2) How much higher is the temperature in Mumbai from that in Srinagar?
_____.
- 3) How many degrees will the temperature need to rise for it to reach 40°C in Thiruvananthapuram?
_____.
- 4) How much lower is the temperature of Kolkata from that in Chennai?
_____.

ABILITY TO COMPUTE

VSA

- 28 Find out the area of rectangle which has length 6 cm and breadth 17 cm.

1M


29	<p>What is the difference between the biggest and smallest part of this pie chart / chapatti chart.</p> 	1M
30	<p>Fill in the blanks.</p> <p>$53 \times 100 = \underline{\hspace{2cm}}$.</p>	1M
31	<p>If a person needs 30g of dal for one day. Then for 6 days how much dal does he need?</p>	1M
32	<p>Find out the length of the boundary of given triangle.</p>  <p>Boundary of triangle = $\underline{\hspace{2cm}}$.</p>	1M
33	<p>If 10 one rupee coins weigh 48g then how much will 10,000 coins weigh?</p> <p>$\underline{\hspace{1cm}}$ kg $\underline{\hspace{1cm}}$ g.</p>	1M

	SA															
34	Find out the volume of the cuboid which has the length, breadth and height are 9 cm, 10 cm and 11 cm of its side.	2M														
35	576 books are to be packed in boxes. If one box has 24 books, how many boxes are needed?	2M														
36	<p>Find out from growth chart.</p> <table border="1"> <caption>Plant Growth Data</caption> <thead> <tr> <th>Days</th> <th>Length of plant (in cm)</th> </tr> </thead> <tbody> <tr> <td>0</td> <td>0</td> </tr> <tr> <td>4</td> <td>1.5</td> </tr> <tr> <td>8</td> <td>5.5</td> </tr> <tr> <td>12</td> <td>9.2</td> </tr> <tr> <td>16</td> <td>9.8</td> </tr> <tr> <td>20</td> <td>10.2</td> </tr> </tbody> </table> <p>a) Between which days did the length of the plant change the most?</p>	Days	Length of plant (in cm)	0	0	4	1.5	8	5.5	12	9.2	16	9.8	20	10.2	2M
Days	Length of plant (in cm)															
0	0															
4	1.5															
8	5.5															
12	9.2															
16	9.8															
20	10.2															

- i) 0-4 ii) 4-8 iii) 8-12 iv) 12-16
- b) What could be the length of this plant on the 14th day approximately?
- i) 8.7cm ii) 9.9cm iii) 10.2cm iv) 10.5cm


37

Find out the side and area of given square whose length of boundary is 44cm.



2M

38



a) How much will two pens cost?

_____.

b) If you have Rs.20 how much will be left with you after buy a soap?

_____.

2M

LA

39

The table shows the amount fixed by four states for farm workers.

4 M

State	Salary for one day(Rs)
Haryana	135
Rajasthan	73
Madhya pradesh	97
Orissa	75

- a) Which state has fixed the highest amount? Which state has fixed the lowest amount?

- b) Bhairon singh is a worker in Rajasthan. If he works for 8 weeks on the farm, how much will he earn?

- c) Neelam is a worker in Haryana. If she works for $2\frac{1}{2}$ months on the farm, how much will she earn?

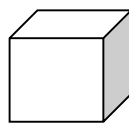
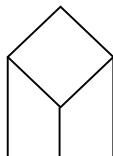
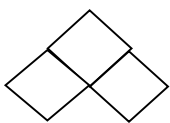
- d) How much more will a farm worker in Madhya Pradesh get than a worker in Orissa after working for 9 weeks?

PSA

VSA

40

Tick the deep drawing of cube.



1M

41

The fencing of a square garden is 20 m in length. How long is one side of the garden?

1M

42

One kg of onion becomes 100g when the water dries up. Then how much of fresh onions should be dried to get 500g dried onion?

1M

43

Choose the question which makes the best story problem.

A shopkeeper has 204 eggs. He puts them in egg trays. Each tray has 12 eggs.

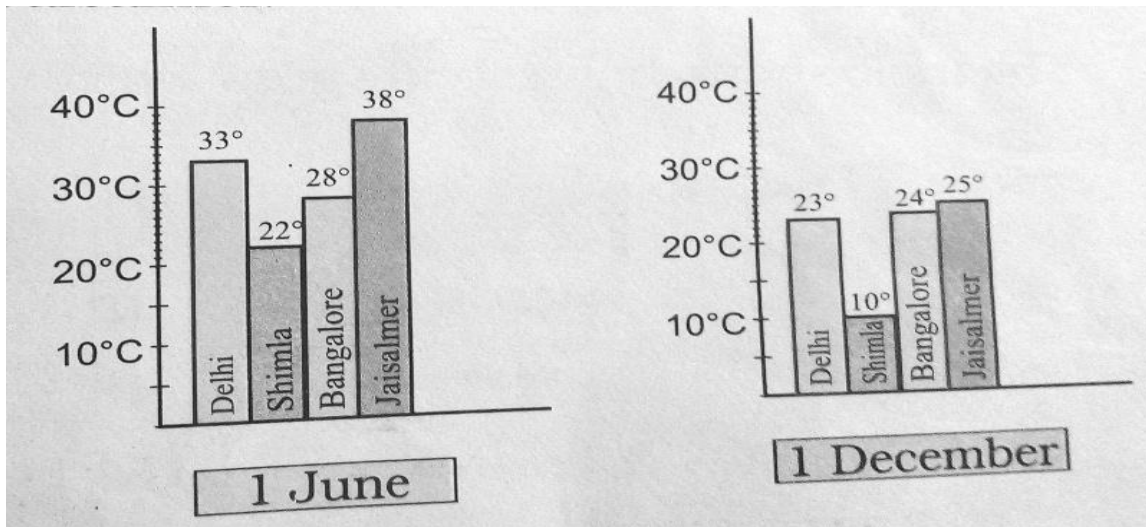
- a) How many more eggs will he need?
- b) How many fresh eggs does he sell?
- c) How many egg trays does he need?

1M

44

Find out from the bar chart.

1M




Which city shows little change in temperature on the two days – 1 June and 1 December.

_____.

45

1M



This cut out is folded to make a cube. Which number side will be opposite to the number 6 after folded?

_____.

SA

46

There are 28 laddoos in 1 kg. How many laddoos will be there in 12kg? If 16 laddoos can be packed in 1 box, how many boxes are needed to pack all these laddoos?

2M

47

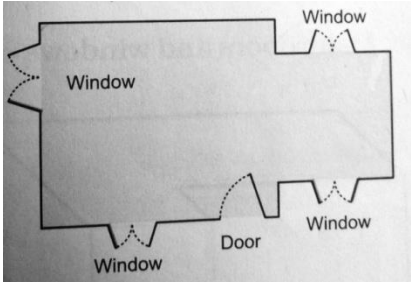
Make bar chart for the number of children absent on each day during a week.

2M

Days of the week	Number of children absent
Monday	15
Tuesday	20
Wednesday	05
Thursday	30
Friday	25

--	--	--

48	Arbaz plans to tile his kitchen floor with green square tiles. Each side of the tile is 10 cm . His kitchen is 90 cm in length and 90 cm wide . How many tiles will he need?	2M
----	--	----

49	<p>Draw deep drawing of given floor map.</p> 	2M
----	--	----

50	<p>Convert</p> <p>a) 980 paise = Rs _____.</p> <p>b) Rs. 240.50 = _____ paise.</p>	2M
----	--	----

	LA	
--	----	--

51	The table shows how rabbits grew every year in Australia.	4M
----	---	----

Time	Number of rabbits
Start	10
1 year	18
2 year	32
3 year	58
4 year	108
5 year	
6 year	

1. After each year the number of rabbits was,

- a) A little less than double the number of rabbits in the last year.
- b) Double the number in the last year.
- c) 8 more than the number in the last year.
- d) more than double the number of rabbits in the last year.

2. Find the number of rabbits at the

- a) End of year 5 = _____ rabbits
- b) End of year 6 = _____ rabbits

3. After which year did the number of rabbits cross 1000?

केन्द्रीय विद्यालय, वायुसेना स्थल बागडोगरा

वार्षिक परीक्षा

2018-19

विषय:	हिन्दी		कक्षा:	पाँचवीं
अवधि:	2 घंटे		पूर्णांक:	80

नाम: _____ अनुक्रमांक _____ अनुभाग _____

निरीक्षक हस्ताक्षर: _____ परीक्षक हस्ताक्षर _____ प्राप्तांक: _____

निर्देश: सभी प्रश्न अनिवार्य हैं।

पठन

अपठित गद्यांश

नीचे दिए गए अनुच्छेद को पढ़कर प्रश्नों के उत्तर लिखो।

दशहरे का उत्सव शक्ति और शक्ति का समन्वय बताने वाला उत्सव है। नवरात्रि के नौ दिन जगदम्बा की उपासना करके शक्तिशाली बना हुआ मनुष्य विजय प्राप्ति के लिए तत्पर रहता है। इस दृष्टि से दशहरे अर्थात् विजय के लिए प्रस्थान का उत्सव आवश्यक भी है। भारतीय संस्कृति सदा से ही वीरता व शौर्य की समर्थक रही है। प्रत्येक व्यक्ति और समाज के रुधिर में वीरता का प्रादुर्भाव हो कारण से ही दशहरे का उत्सव मनाया जाता है। यदि कभी युद्ध अनिवार्य ही हो तब शत्रु के आक्रमण की प्रतीक्षा ना कर उस पर हमला कर उसका पराभव करना ही कुशल राजनीति है। भगवान राम के समय से यह दिन विजय प्रस्थान का प्रतीक निश्चित है।

प्रश्न-1	दशहरे का उत्सव क्या बताता है ? उत्तर: _____		1
प्रश्न-2	नवरात्रि में कितने दिन जगदम्बा की उपासना होती है ? उत्तर: _____		1
प्रश्न-3	विजय के लिए प्रस्थान का उत्सव क्यों आवश्यक है ? उत्तर: _____		1

प्रश्न-4	भारतीय संस्कृति किसकी समर्थक रही है ? उत्तर: _____		1
प्रश्न-5	दशहरे का उत्सव क्यों मनाया जाता है ? उत्तर: _____		1
प्रश्न-6	कुशल राजनीति क्या है ? उत्तर: _____		1
प्रश्न-7	किसके समय से यह दिन विजय प्रस्थान का प्रतीक निश्चित है ? उत्तर: _____		1
प्रश्न-8	निम्न का विलोम शब्द लिखो- शत्रु - _____		1
प्रश्न-9	रिक्त स्थान भरो - भारतीय संस्कृति सदा से ही _____ रही है ।		1
प्रश्न-10	निम्न का पर्यायवाची शब्द लिखो - त्योहार - _____		1
पठित गद्यांश			
नीचे दिए गए अनुच्छेद को पढ़कर प्रश्नों के उत्तर लिखो ।			
<p>सुबह का समय था । पहाड़ों के पीछे से सूरज झाँक रहा था । दस वर्ष का बिशन घर से बाहर निकल आया । वह रोज इसी समय, इसी रास्ते से कर्नल दत्ता के फार्म हाउस पर जाता है । कर्नल दत्ता की पत्नी पढाई में उसकी मदद करती है । फार्म से लगे सेबों के बागों में कीटनाशक दवा का छिडकाव हो रहा था और बहुत तड़के काम शुरु हो जाता था । बिशन पगडंडी से अभी सड़क तक आ ही रहा था कि उसे गोली चलने की आवाज़ सुनाई दी । उसने इधर-उधर देखा, कोई भी दिखाई नहीं दिया । वह कुछ ही दूर चला था कि उसे फिर गोली चलने की आवाज़ सुनाई दी । इस बार एक नहीं, दो-तीन गोलियाँ एक साथ चली थी । गोलियों की आवाज़ से पूरी घाटी गूँज गई । पंछी घबरा गए ।</p>			
प्रश्न -1.	समय कौन सा था ? उत्तर - _____		1

प्रश्न 2.	सूरज कहाँ से झाँक रहा था ? उत्तर: _____		1
प्रश्न 3.	बिशन की आयु क्या है ? उत्तर: _____		1
प्रश्न 4.	कर्नल दत्ता की पत्नी किसमें बिशन की मदद करती थी ? उत्तर: _____		1
प्रश्न 5.	सेबों के बाग में कौन-सी दवा का छिडकाव हो रहा था ? उत्तर: _____		1
प्रश्न 6.	बिशन को किसकी आवाज़ सुनाई दी ? उत्तर: _____		1
प्रश्न 7.	रिक्त स्थान भरो - वह रोज इसी समय , _____ पर जाता है ।		1
प्रश्न 8.	निम्न शब्द का पर्यायवाची शब्द लिखो - तड़के - _____		1
प्रश्न 9.	निम्न वाक्य को शुद्ध करो - पहाड़ों सूरज के पीछे से रहा था झाँक । _____		1
प्रश्न 10.	गद्यांश में से एक संज्ञा शब्द छाँट कर लिखो - _____		1
लेखन			
प्रश्न-1	कोको के माता-पिता कहाँ गए थे ? उत्तर: _____		1
प्रश्न-2	अंधेर नगरी की प्रजा राजा के मरने पर खुश क्यों हुई ? उत्तर: _____ _____		1

प्रश्न-3	स्वामीनाथन के दादा कौन थे ? उत्तर: _____		1
प्रश्न-4	नदी की टेड़ी-मेढ़ी धार किसकी तरह लगती है ? उत्तर: _____		1
प्रश्न-5	धरती की गुल्लक किन-किन साधनों से भरती है ? उत्तर: _____		1
प्रश्न-6	“पानी रे पानी” पाठ में पानी के संकट के किस प्रमुख कारण की बात की गई है ? उत्तर: _____ _____ _____		2
प्रश्न-7	जवाहरलाल को अमरनाथ तक का सफ़र अधूरा क्यों छोड़ना पड़ा ? उत्तर: _____ _____ _____		2
प्रश्न-8	बाघ और बाघिन सारा दिन क्या करते थे ? उत्तर: _____ _____ _____		2
प्रश्न-9	स्वामीनाथन का अपनी दादी के साथ कैसा रिश्ता था ? दो वाक्यों में लिखो उत्तर: _____ _____ _____ _____		2

प्रश्न-10	कोको की माँ ने उसके लिए क्या बनाया ? उत्तर: _____ _____ _____		2
<u>व्याकरण</u>			
प्रश्न-1	मुहावरे का वाक्य में प्रयोग करें - आँख भर आना _____		1
प्रश्न-2	रेखांकित शब्द का अर्थ लिखो- राजम बड़ा बहादुर लड़का है _____		1
प्रश्न-3	तुकवाले शब्द लिखो- धेला-_____		1
प्रश्न-4	चन्द्र बिंदु या अनुश्वार लगाकर शब्द को ठीक करो- पाच		1
प्रश्न-5	'ई' की मात्रा लगाकर सही शब्द बनाओ- तशतर - _____		1
प्रश्न-6	स्त्रीलिंग लिखें। बाघ - _____		1
प्रश्न-7	सही निशान लगाओ- (, ?, !) ये फूल कैसे हैं _____		1
प्रश्न-8	विलोमशब्द लिखो। दुश्मनी _____		1
प्रश्न-9	विशेषणशब्दपर गोला करो । वह बाघ खतरनाक है		1

