

CODE NO. : A	TOTAL PAGES : 9
--------------	-----------------

KENDRIYA VIDYALAYA AFS BAGDOGRA

ANNUAL EXAMINATION (2018-19)

SUBJECT :	EVS	CLASS :	IV
TIME :	120 MINUTES	Max.Marks.	80

Instruction: ALL QUESTIONS ARE COMPULSORY.



NAME : \_\_\_\_\_ SEC : \_\_\_\_\_ ROLL NO. \_\_\_\_\_ DATE: \_\_\_\_\_






MARKS OBTAINED- \_\_\_\_\_




SIGNATURE OF INVIGILATOR

SIGNATURE OF EXAMINER

OBSERVATION

1	Observe the pictures and write their names	
a.	 _____	1M
b.	 _____	1M

<p>c.</p>	 <p>_____</p>	<p>1M</p>
<p>d.</p>	 <p>_____</p>	<p>1M</p>
<p>e.</p>	 <p>_____</p>	<p>1M</p>
<p>f.</p>	 <p>_____</p>	<p>1M</p>
<p>g.</p>	 <p>_____</p>	<p>1M</p>

<p>h.</p>	 <p>_____</p>	<p>1M</p>
<p>i.</p>	 <p>_____</p>	<p>1M</p>
<p>j.</p>	 <p>_____</p>	<p>1M</p>
<p>2.</p>	<p>Babu ji sells previous day's vegetables first. Why do you think he does this?</p> <p>_____</p> <p>_____</p>	<p>2M</p>
<p>3.</p>	<p>What will people do after finishing langar?</p> <p>_____</p> <p>_____</p> <p>_____</p>	<p>2M</p>

4.	<p>Why is there a quarrel in Mareta's family?</p> <hr/> <hr/> <hr/>	2M
5.	<p>What is Garam Masala? Name the spices used to make it?</p> <hr/> <hr/> <hr/>	2M
6.	<p>What was Wahida's big dream?</p> <hr/> <hr/>	2M
7. a. b. c. d. e.	<p>Write five lines about 'Desert Oak Tree'.</p> <hr/> <hr/> <hr/> <hr/> <hr/>	5M
8. a. b.	<p>What should we do if we have diarrhoea and vomiting?</p> <hr/> <hr/>	5M

c.		
d.		
e.		
<b>IDENTIFICATION</b>		
1.	Fill in the blanks by choosing the correct word :	
a	_____ tree has unusual roots.( Banyan / Mango)	1M
b	_____ is celebrated on the harvest of rice crop.(Bihu / Christmas)	1M
c	Maretta's father wants to see _____ match.(Cricket / football)	1M
d	_____ is the currency of Abu-Dhabi.(Dirham / Dollar)	1M
e.	_____ makes the food yellow.(Turmeric / zeera)	1M
f.	_____ cures our toothache. ( Clove / Cumin)	1M
g.	Wahida Prism is the first woman to join Indian _____.( Navy / Airforce)	1M
h.	_____ keeps the stomach healthy.( Saunf / Zeera)	1M
i.	Chuskit was a _____ year old girl.( ten / eleven)	1M
j.	_____ tried to solve Chuskits problem.( Abdul / Abba Le)	1M
2.	How do you come to know that vegetables have spoilt? _____ _____	2M

3.	Why do birds make a nest? What is nest made of? <hr/> <hr/>	2M
4.	What preparations are made to celebrate Bihu? <hr/> <hr/>	2M
5.	Why do many trees cannot grow in desert area? <hr/> <hr/>	2M
6.	What are the responsibilities of Wahida Prism? <hr/> <hr/> <hr/>	2M
7. a. b. c. d. e.	Write five lines about Pochampalli. <hr/> <hr/> <hr/> <hr/> <hr/>	5M

<b>DISCOVERY OF FACTS</b>		
1	Answer the following in one word :	
a	Name one vegetable / fruit which is heavy to carry. _____	1M
b	Name one vegetable / fruit which is smooth to touch. _____	1M
c	Who ordered to give Mid-Day meal? _____	1M
d	Where is Langar served? _____	1M
e	How many hours it took to travel from Abu-Dhabi to Kerala by aeroplane? _____	1M
2.	What type of teeth do the following animals have?	3M
a.	Cat - _____	
b.	Snake - _____	
c.	Squirrel - _____	

3.	What were the things Nandita was afraid to do?  a. _____  b. _____  c. _____	3M
4.	Why did Pilloo Aunty paid full price of seven kulfis?  _____  _____  _____	3M
5.	What was Chuskit 's dream? Why cannot she go to school?  _____  _____  _____	3M
6.	Who brings all the material to cook so much food in Langar?  _____  _____  _____	

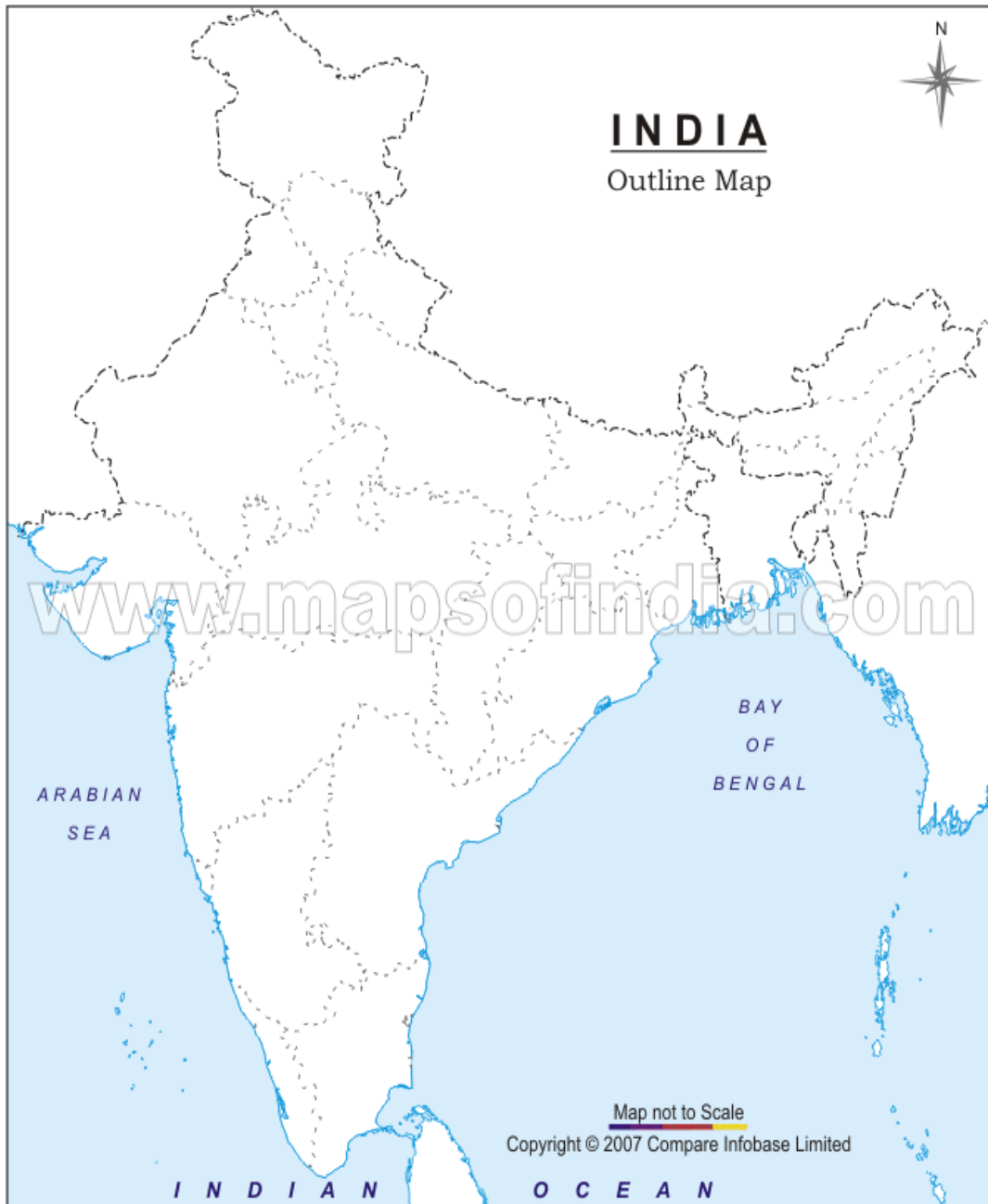


7.

Locate these in the political map of India -

1. Mumbai (Maharashtra)
2. Assam
3. Punjab
4. Andhra Pradesh
5. Kerala

5M



<b>CODE NO: A</b>	<b>TOTAL PAGE :</b>
-------------------	---------------------

**KENDRIYA VIDYALAYA**

**ANNUAL EXAMINATION (2018 -19)**

<b>SUBJECT</b>	<b>Maths</b>	<b>CLASS</b>	<b>IV</b>
<b>TIME</b>	<b>2HOURS</b>	<b>MARKS:</b>	<b>80</b>

**Instruction: ALL QUESTIONS ARE COMPULSORY**

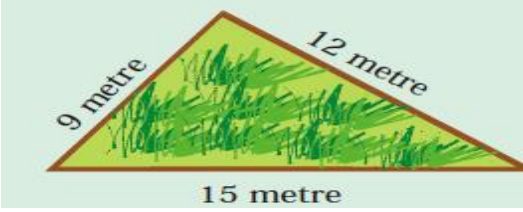
**NAME :** \_\_\_\_\_ **SEC :** \_\_\_\_\_ **ROLL NO.** \_\_\_\_\_ **DATE:** \_\_\_\_\_

**MARKS OBTAINED-** \_\_\_\_\_

**SIGNATURE OF INVIGILATOR**

**SIGNATURE OF EXAMINER**

<b>Q.No</b>		<b>MARKS</b>
<b>Q1.</b>	<b>Convert the following into gram :</b>  2kg =.....gram	<b>1 M</b>
<b>02</b>	<b>Complete the pattern :</b>  864 , 764, 664, ....., ....., .....	<b>1 M</b>
<b>03</b>	<b>Solve it :</b>  1 , 4, 9, 16, 25 _____	<b>1M</b>
<b>Q4</b>	$6 \times 45 \times 2 \times 0 = \dots\dots\dots$	<b>1M</b>
<b>Q5</b>	<b>Fill in the blanks :</b>  Multiplication is _____ addition.	<b>1M</b>

<p><b>Q6</b></p>	<p><b>Find the length of the boundary :</b></p>  <p>_____</p>	<p><b>1M</b></p>
<p><b>Q7</b></p>	<p><b>2 m = _____ cm.</b></p>	<p><b>1 M</b></p>
<p><b>Q8</b></p>	<p><b>6 x 100 = .....</b></p>	<p><b>1 M</b></p>
<p><b>09.</b></p>	<p><b>Area of square = _____</b></p>	<p><b>1 M</b></p>
<p><b>Q10</b></p>	<p><b>Guess which is the heaviest : 5kg rice or 250 gram tea :</b></p> <p>_____</p>	<p><b>1 M</b></p>
<p><b>Q11</b></p>	<p><b>Starting from 0 , rabbit jumps 5 steps at a time- In how many jumps does he reach 25?</b></p> <p>_____</p>	<p><b>2M</b></p>
<p><b>Q12</b></p>	<p><b>Complete it --</b></p> <p><b>2 , 5 , 4 , 7 , ____</b></p> <p><b>2b , 4d, 6f, 8h ____</b></p>	<p><b>2M</b></p>




<p><b>Q19</b></p>	<table style="margin-left: auto; margin-right: auto;"> <tr> <td style="padding-right: 20px;">Kg</td> <td>gram</td> </tr> <tr> <td style="padding-right: 20px;">38</td> <td>500</td> </tr> <tr> <td style="padding-right: 20px;">_ 13</td> <td>300</td> </tr> <tr> <td colspan="2">-----</td> </tr> <tr> <td colspan="2">-----</td> </tr> </table>	Kg	gram	38	500	_ 13	300	-----		-----		<p><b>1M</b></p>
Kg	gram											
38	500											
_ 13	300											
-----												
-----												
<p><b>Q20</b></p>	<p>Fill in kilogram or gram : A sack of rice weighs 30 _____</p>	<p><b>1M</b></p>										
<p><b>Q21</b></p>	<p>Perimeter of a square = _____ × _____</p>	<p><b>1M</b></p>										
<p><b>Q22</b></p>	<p>Draw bar graph(pictograph) of class 4th according section wise with the help of following data.</p> <table style="margin-left: auto; margin-right: auto;"> <tr> <td style="padding-right: 20px;">A-20</td> <td>B-15</td> </tr> <tr> <td style="padding-right: 20px;">C-25</td> <td>D-25</td> </tr> </table>	A-20	B-15	C-25	D-25	<p><b>2M</b></p>						
A-20	B-15											
C-25	D-25											
<p><b>Q23.</b></p>	<p>2.5 kg + 700g + 200g = _____ kg _____ g</p>	<p><b>2M</b></p>										

**Q24.** Divide and write the dividend and quotient :  
 4) 384 (

Dividend-.....  
 Quotient-.....

**2M**

**Q25** Find the perimeter (boundary) of this figure. The squares are 1cm squares. (Note: do not use a scale)



.....

**2M**

**Q26** Some children were asked which of these they liked most- tea coffee or milk :

The drink they like	Number of children
Milk	20
Coffee	10
Tea	10

---

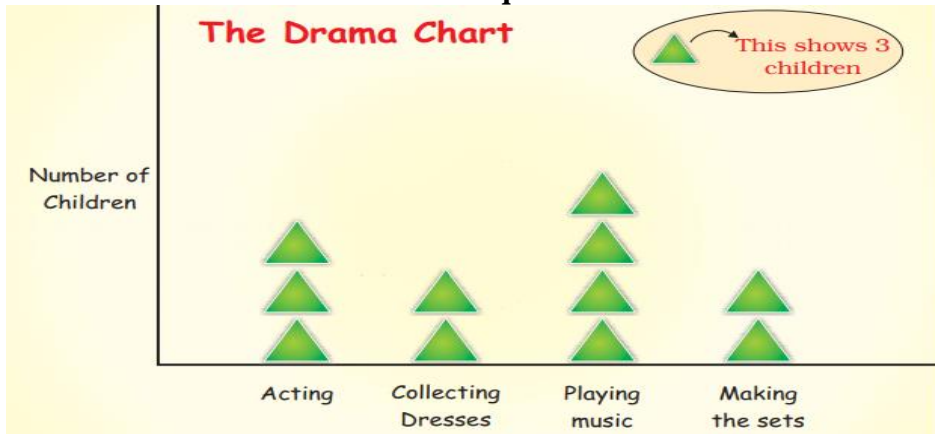
Total no. of children = .....

**2M**

Q27

Look at the chart and answer these question :

4M



a .How many children are acting in the drama?

\_\_\_\_\_

b. Which are more – children making the sets or those acting?

\_\_\_\_\_

c. What is being done by most of the children?

\_\_\_\_\_

d. How many children are collecting dresses?

\_\_\_\_\_

## ABILITY TO COMPUTE

Q28

In which we need bigger bag?  
Tick the right answer.

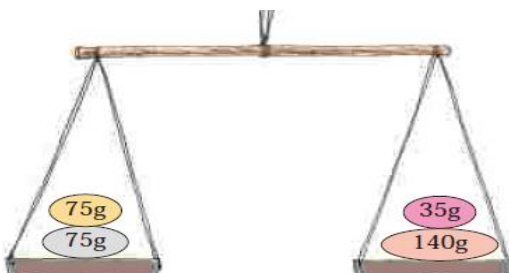
1M

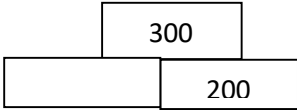
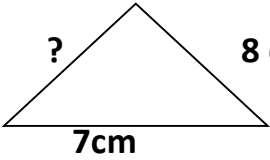
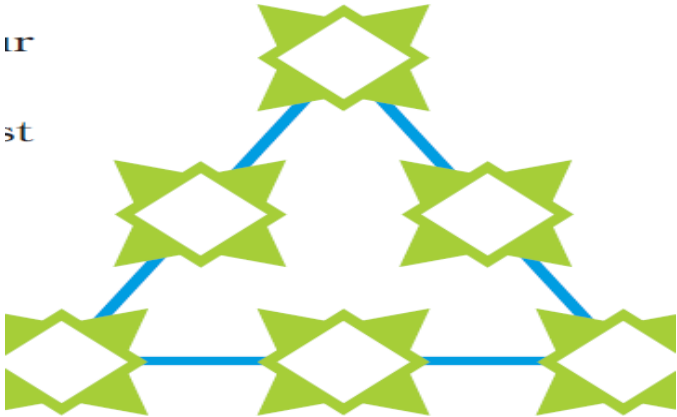
- 1) 1kg sugar
- 2) 1 kg popcorn

Q29


Which pan of the balance will go down? Show by drawing an arrow.

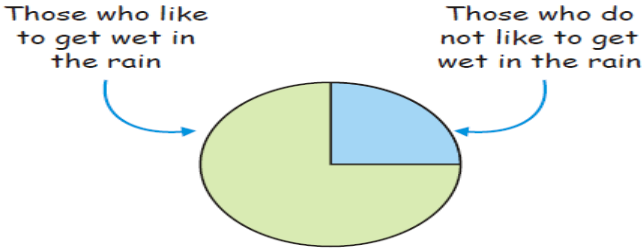
1M




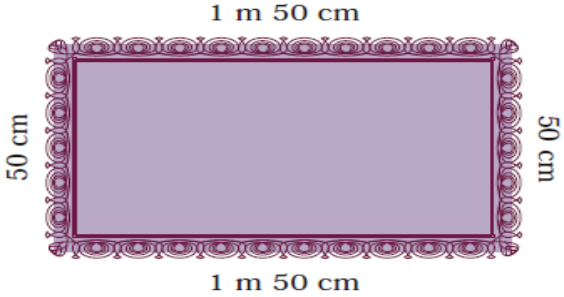
Q30.	20. 30. 40. 50. _____	1M
Q31	<p>Observe the number patterns and fill in the boxes :</p> 	1M
Q32	<p>Which two tables will you use for writing the table of 9?  .....</p>	1M
Q33	<p>Find the missing length in this figure :</p>  <p>Boundary of length= 22cm  Missing length.....</p>	1M
Q34	<p>Use numbers 1 -6 to make your own magic triangle.  Rule: numbers on each side must add up to 10.</p> 	2M
Q35	<p>A hockey field is 91 meter 40 cm long and 55m wide .How long is the boundary of the field.  .....</p>	2M



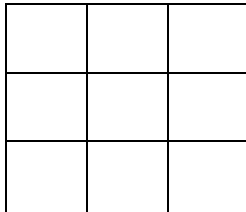
<p><b>Q36</b></p>	<p><b>Guess how many squares of one centimeter can fill this rectangle?</b></p>  <p>Write your guess here _____</p>	<p><b>2M</b></p>
-------------------	--	------------------


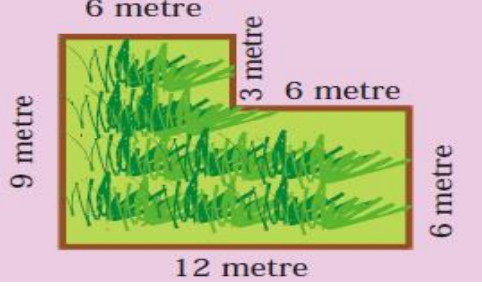
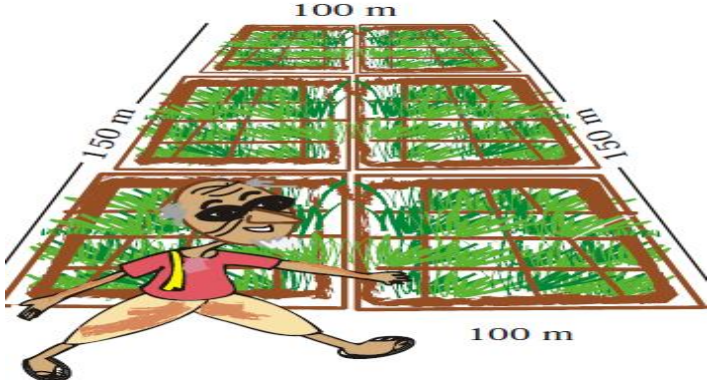
<p><b>Q37</b></p>	<p><b>Rahul made a chapatti chart after asking his friends –</b></p>  <p><b>See the chapatti chart and tell how many children like to get wet in the rain?</b></p> <p>i) <math>1/2</math>                  ii) <math>1/4</math>                  iii) <math>3/4</math></p>	<p><b>2M</b></p>
-------------------	--	------------------


<p><b>Q38</b></p>	<p><b>Count and write :</b></p>  <p>There are .....and</p> <p>Each rows have.....plants.</p>	<p><b>2M</b></p>
-------------------	---	------------------

<p><b>Q39</b></p>	<p><b>Ganapati's wife works in a tailor's shop. She has to fix lace around a table cloth. She bought a 100 meter roll of lace. Look at the picture and give answer to the following question:</b></p> <div style="text-align: center;">  </div> <p><b>a) Tell how much lace is used for one table cloth?</b></p> <p>_____</p> <p><b>b) How much lace will be used in 3 such table cloths?</b></p> <p>.....</p> <p><b>c) How much lace will be left in the roll?</b></p> <p>.....</p> <p><b>d) Find length of the boundary of the table cloth?</b></p> <p>.....</p>	<p><b>4M</b></p>
-------------------	---	------------------

**PROBLEM SOLVING ABILITY**

<p><b>Q40.</b></p>	<p><b>Count the squares in this shape:</b></p> <div style="display: flex; align-items: center; justify-content: center;">  <div style="margin-left: 20px;"> <p>_____</p> </div> </div>	<p><b>1M</b></p>
<p><b>Q41.</b></p>	<p><b>If <math>75 \times 8 = 600</math>, then <math>75 \times 80 =</math>.....</b></p>	<p><b>1M</b></p>
<p><b>Q42.</b></p>	<p><b>5 kg = 5 × .....g = 5000 g</b></p>	<p><b>1M</b></p>

<p><b>Q43.</b></p>	<p>The cost of 1 Kg apple is Rs.40 Find the cost of 500 g apples</p> <p>.....</p>	<p>1M</p>
<p><b>Q44.</b></p>	<p>Complete the pattern :</p> 	<p>1M</p>
<p><b>Q45.</b></p>	<p>Find the perimeter of this field :</p>  <p>_____</p>	<p>1M</p>
<p><b>Q46.</b></p>	<p>Kg or g</p> <p>1) A tube of fevistick = _____</p> <p>2) Human body weight = _____</p>	<p>2M</p>
<p><b>Q47.</b></p>	<p>Chandu's father is called the young man' in his village.at 70 years of ago. He is fully fit. Doyou know his secret? He goes for a walk around the field every morning. every day he talks four rounds of Chengdu's field.</p> <p>What is the total distance he covers?</p> <p>4 × _____ = _____ m = _____ km</p> 	<p>2M</p>

Q48.	<p>Divide.</p> $672 \div 12$	2M
Q49.	<p>Complete the pattern :</p> 	2M
Q50.	<p>Draw pictograph on the basis of monthly report of transport department.</p> <p>Means of transport prefer by the people.</p> <p>Car-10 Bus-25 Rickshaw- 20 Scooter- 15 Rail-25</p>	2M
Q51.	<p>Sea shells:</p> <p>Dhruva lives near the sea. He thought of making necklaces for his three friends. He looked for sea-shells the whole day. He collected 112 sea shells by evening. Now he had many different colorful and shiny shells.</p> <p>He took 28 shells for one necklace.</p> $112 - 28 = 84$ <p>Now he was left with 84 shells. Again he took 28 more shells for the second necklace.</p>	4M

**a. How many shells are left now?**

.....

**b. Then he took shells for the third necklace.**

So he was left with.....shells.

**c. How many necklaces can Dhruv make from 112 shells?**

.....

**d. Are the shells enough for making necklaces for all his friends? .....**

**KENDRIYA VIDYALAYA AFS, BAGDOGRA**  
**ANNUAL EXAMINATION, 2018-19**

<b>SUBJECT:</b>	<b>ENGLISH</b>		<b>CLASS:</b>	<b>IV</b>
<b>TIME:</b>	<b>2 HOURS</b>		<b>MAX. MARKS:</b>	<b>80</b>

**INSTRUCTIONS:**

- 1. All questions are compulsory.**
- 2. Write the answer in the space provided in the booklet itself.**

NAME: \_\_\_\_\_ SEC: \_\_\_\_\_ ROLL NO: \_\_\_\_\_

INVIGILATOR'S SIGN: \_\_\_\_\_ MARKS OBTAINED: \_\_\_\_\_

EXAMINER'S SIGN: \_\_\_\_\_

**READING****(UNSEEN PASSAGE)**

<b>1.</b>	<p><b>Read the passage and answer the following questions given below-</b></p> <p>Mohan and Sohan were friends .Once they made a plan to go to Varanasi. They passed through a forest. Wild animals lived in that forest.</p> <p style="padding-left: 40px;">On the way , they saw a bear. Sohan was selfish. Sohan climbed up a tree to save his life. Mohan could not climbed up the tree. He lay down on the ground. He held his breath. The bear smelt him and took him to be dead.</p> <p style="padding-left: 40px;">He went away. Sohan came down .He asked Mohan “What was the bear speaking in your ears?” Mohan replied , “He adviced me to beware of those friends who run away in time of danger. The moral of the story is ‘A friend in need is a friend indeed.’”</p>	
<b>a)</b>	Write the name of two friends from the story.	<b>1M</b>
<b>Ans</b>	_____	

<b>b)</b> <b>Ans</b>	Who lived in the forest ? _____	<b>1M</b>
<b>c)</b> <b>Ans</b>	What did Sohan do to save his life ? _____	<b>1M</b>
<b>d)</b> <b>Ans</b>	What did bear do with Mohan ? _____	<b>1M</b>
<b>e)</b> <b>Ans</b>	How was Sohan ? _____	<b>1M</b>
<b>f)</b> <b>Ans</b>	What is the moral of the story ? _____	<b>1M</b>
<b>g)</b> <b>Ans</b>	Write the opposite of the given word- Up _____	<b>1M</b>
<b>h)</b> <b>Ans</b>	Write simple past tense of the word 'Smell' _____	<b>1M</b>
<b>i)</b> <b>Ans</b>	Circle the naming word in the sentence given below - Once they made a plan to go to Varanasi.	<b>1M</b>
<b>j)</b> <b>Ans</b>	Make a sentence using the word 'Tree' _____	<b>1M</b>

**(SEEN PASSAGE)**

<b>2.</b>	<p><b>Read the passage and answer the following questions given below:-</b></p> <p>Once upon a time , an old carpenter bought a very queer piece of wood .As he used his plane on it,he heard a little laughing voice say, “Stop! You’re tickling me.”</p> <p>The old man was puzzled by the voice .He said, “This is a strange piece of wood . What shall I do with it? I think. I’ll make it into a puppet.</p> <p align="center">He set to work, and as the puppet boy took shape, the old man said, “He must have name .I will call him Pinocchio.”</p> <p align="center">As soon as he finished making eyes , the carpenter was amazed to see them move.</p>	
-----------	---	--

a) Ans	What did the carpenter buy ? _____	1M
b) Ans	What did he made out of the piece of wood ? _____	1M
c) Ans	What did he call his puppet ? _____	1M
d) Ans	Why was the carpenter amazed ? _____	1M
e) Ans	Write the full form of – “You’re” . _____	1M
f) Ans	Write the opposite of the word ‘New’ from the passage. _____	1M
g) Ans	Write a word from the passage which means ‘Strange’. _____	1M
h) Ans	What is the past form of the given word- Puzzle - _____	1M
i) Ans	Write one describing word from the passage. _____	1M
j) Ans	Circle the action word in the given sentence- The old man was puzzled by the voice.	1M
<b><u>PROSE AND POETRY</u></b>		
<b>Answer the following questions-</b>		
1. Ans	Who finally made the cow get up ? _____ _____	1M
2. Ans	Who was Hiawatha ? _____ _____	1M
3.	Who came to Akbar’s court ?	1M



<b>Ans</b>	_____	
<b>4.</b> <b>Ans</b>	Which part of the plant should be watered ? _____ _____	<b>1M</b>
<b>5.</b> <b>Ans</b>	What did the boy make with the trunk of the tree ? _____ _____	<b>1M</b>
<b>6.</b> <b>Ans</b>	Why did the cow refuse to get up ? _____ _____ _____	<b>2M</b>
<b>7.</b> <b>Ans</b>	Why is the play called 'The Giving Tree' ? _____ _____ _____	<b>2M</b>
<b>8.</b> <b>Ans</b>	Why did the child in the poem 'Books' like looking at pictures ? _____ _____ _____	<b>2M</b>
<b>9.</b> <b>Ans</b>	What did Pinocchio say in the end ? _____ _____	<b>2M</b>
<b>10.</b> <b>Ans</b>	What did the boy wonder about ? _____ _____	<b>2M</b>

**GRAMMAR**

<b>1.</b>	Write the simple past tense of the given word - Come- _____.	<b>1M</b>
<b>2.</b>	Write( whenever / whoever )to complete the sentence -	<b>1M</b>

	_____ I am hungry ,I eat.	
3.	Write( two / to) in the following sentence- I have _____ leave at 10 am.	1M
4.	Fill in the blanks with the correct word. A _____Pundit visited the court of Akbar.(learnt/learned)	1M
5.	Add ‘ a’ or ‘an’ before the given word . _____wrist watch	1M
6.	Which language is used in Andhra Pradesh? _____	1M
7.	Punctuate the following sentence- on monday i will go to school	1M
8.	Add ‘ly’ to make new word and fill in the blanks- The tree gave its fruits to the boy _____. (happy)	1M
9.	Fill in the blank with the correct word. A branch has a number of _____.(leaf/leaves)	1M
10.	Write rhyming words for the word given below- Heat _____	1M
11.	Make a sentence with the word- <b>Delicious</b> . _____	1M
12.	Write a sentence beginning with - I shall _____	1M
13.	Write the simple present tense of the given word- Picked - _____	1M
14.	Fill in the blank with describing word- Pinocchio is a _____puppet.	1M
15.	Write the name of two things which are made of wood- _____	1M
	<b><u>CREATIVE WRITING</u></b>	<b>5M</b>
1.	Write down a paragraph about ‘Cow’. _____	



3.	<p>Draw the picture of a “Puppet” and write four sentences about it.</p> <hr/> <hr/> <hr/> <hr/> <hr/> <hr/> <hr/> <hr/> <hr/> <hr/> <hr/> <hr/> <hr/> <hr/> <hr/>	5M
----	--	----

1.	<p style="text-align: center;"><b><u>SPELLING</u></b></p> <p><b>Arrange the jumbled letters to make a meaningful word-</b></p> <p>a)</p> <ul style="list-style-type: none"> <li>i) ERRUSQIL - _____</li> <li>ii) RUFOERCOS - _____</li> <li>iii) GIETHYW - _____</li> <li>iv) BOMEODSY - _____</li> <li>v) CSSUIBHI - _____</li> </ul>	<p>1M</p> <p>1M</p> <p>1M</p> <p>1M</p> <p>1M</p>
b)	<p><b>Encircle the correct spelling-</b></p> <ul style="list-style-type: none"> <li>i) Chicken              chickan              chickeen</li> <li>ii) Fluentlay            fluently              fluantly</li> <li>iii) Tommorrow        tomorrow            tommorow</li> <li>iv) Storyes              stories                storeyies</li> <li>v) Secret                secreet                secrete</li> </ul>	<p>1M</p> <p>1M</p> <p>1M</p> <p>1M</p> <p>1M</p>



## केन्द्रीय विद्यालय वायुसेना, बागडोगरा

## वार्षिक परीक्षा

सत्र -2018-19

विषय:	हिंदी		कक्षा :	चौथी
समय:	2 घण्टे		कुल अंक	80

नाम: \_\_\_\_\_ अनुभाग: \_\_\_\_\_ अनुक्रमांक \_\_\_\_\_

निरीक्षक हस्ताक्षर: \_\_\_\_\_ परीक्षक हस्ताक्षर \_\_\_\_\_ प्राप्तांक \_\_\_\_\_

निर्देश: सभी प्रश्न अनिवार्य हैं।

पठन ( पठित गद्यांश )

प्रश्न 1.	नीचे दिए गए कहानी को पढ़कर दिए गए प्रश्नों के उत्तर लिखिए। हुदहुद का सारा शरीर रंग-बिरंगा और चटकीला होता है। पंख काले-काले होते हैं जिन पर मोटी सफेद धारियाँ बनी होती हैं। गर्दन का अगला हिस्सा बादामी रंग का होता है। चोटी भी बादामी रंग की होती है, मगर उसके सिरे काले और सफेद होते हैं। दुम का भीतरी हिस्सा सफेद और बाहरी हिस्सा काले रंग का होता है। चोंच पतली, लम्बी तथा तीखी होती है। इस चोंच से वह आसानी से ज़मीन के भीतर छिपे हुए कीड़े मकोड़ों को ढूँढ़ निकालता है।	
क)	हुदहुद का शरीर कैसा होता है? _____	1
ख)	हुदहुद के पंख कैसे होते हैं?	1

	_____	
ग)	हुदहुद के गर्दन का अगला हिस्सा कैसा होता है? _____	1
घ)	हुदहुद की चोटी किस रंग की होती है? _____	1
ङ.)	हुदहुद के दुम का भीतरी और बाहरी हिस्सा किस रंग का होता है? _____ _____	1
च)	हुदहुद की चोंच कैसी होती है? _____ _____	1
छ)	हुदहुद अपनी चोंच से क्या करता है? _____ _____	1
ज)	गद्यांश से विशेषण शब्द लिखो। _____ धारियाँ।	1
झ)	गद्यांश से द्विरुक्त व्यंजन वाला शब्द लिखिए। _____	1
ञ)	गद्यांश में से दिए गए चीज़ से बनने वाले रंग का नाम ढूँढकर लिखिए। <u>चीज़</u> <u>रंग</u> बादाम                      _____	1

(अपठित गद्यांश)

प्रश्न 2	<p>नीचे दिए गए गद्यांश को पढ़कर दिए गए प्रश्नों के उत्तर लिखिए।</p> <p>भारत अत्यंत सुंदर, रमणीय, शांत एवं प्राकृतिक वैभव से भरपूर देश रहा है। यहाँ देवता भी जन्म लेने को लालायित रहते थे। राम, कृष्ण, बुद्ध, महावीर स्वामी, नानक, कबीर आदि देवों एवं महापुरुषों ने जन्म लिया है, जिन्होंने विश्व को शांति, अहिंसा एवं एकता का पाठ पढ़ाया। इस देश पर प्रकृति भी विशेष रूप से उदार रही। उसने भी मुक्त हाथों से इसे अनेक उपहार प्रदान किए। ग्रीष्म, वर्षा, शरद, शिशिर, हेमन्त और बसंत-छह ऋतुएँ यहाँ बारी-बारी से आती हैं और अपना सौंदर्य बिखरा जाती हैं।</p>	
1)	<p>भारत कैसा देश रहा है?</p> <p>-----</p>	1
2)	<p>यहाँ कौन जन्म लेने को लालायित रहते थे?</p> <p>-----</p>	1
3)	<p>भारत में कौन-कौन से महापुरुषों एवं देवों ने जन्म लिया?</p> <p>-----</p> <p>-----</p>	1
4)	<p>देवों एवं महापुरुषों ने विश्व को कैसा पाठ पढ़ाया?</p> <p>-----</p> <p>-----</p>	1
5)	<p>भारत देश पर कौन विशेष रूप से उदार रही?</p> <p>-----</p>	1
6)	<p>प्रकृति ने देश को क्या प्रदान किए?</p> <p>-----</p>	1
7)	<p>भारत में कौन सी ऋतुएँ बारी-बारी से आती हैं?</p> <p>-----</p>	1



	-----	
8)	कौन अपना सौंदर्य बिखरा जाती हैं ? -----	1
9)	पर्यायवाची शब्द लिखो । हिंदुस्तान - _____	1
10)	गद्यांश से कोई एक संज्ञा शब्द लिखो । -----	1
	<b>लेखन</b>	
प्रश्न 1	‘कौन कविता’ में शरारती जीव किसे कहा गया है? _____	1
प्रश्न 2	पढ़कू क्या पढ़ते थे? _____ _____	1
प्रश्न 3	सुनीता बाजार कैसे गई? _____ _____	1
प्रश्न 4	‘थप्प रोटी थप्प दाल’ में बच्चों ने कौन सा खेल खेला? -----	1
प्रश्न 5	भीखूभाई क्या खाना चाहते थे? -----	1

प्रश्न 6	बच्चों ने खाने-पीने की चीज़े छींके में क्यों रखी ? ----- ----- -----	2
प्रश्न 7	पढ़कू का नाम पढ़कू क्यों पड़ा ? ----- ----- -----	2
प्रश्न 8	सुनीता को दुकानदार का व्यवहार क्यों बुरा लगा ? ----- ----- -----	2
प्रश्न 9	हर बार भीखूभाई कम दाम देना चाहते थे क्यों ? ----- ----- -----	2
प्रश्न 10	आँधी आने पर क्या-क्या होता है ? ----- ----- -----	2
	<u>व्याकरण</u>	

प्रश्न 1	‘ऊ’ की मात्रा लगाकर शब्द बनाओ । जता	1
प्रश्न 2	संज्ञा शब्द को रेखांकित कीजिए। किसने बटन हमारे कुतरे ?	1
प्रश्न 3	विशेषण शब्द लिखो । ----- हलवा	1
प्रश्न 4	दिए गए शब्द में अनुस्वर या चंद्रबिंदु लगाओ । स्वतंत्र	1
प्रश्न 5	पर्यायवाची शब्द लिखिए । धनी - _____	1
प्रश्न 6	किसी एक चीज़ का नाम लिखो जिन्हें हम घोलते हैं । -----	1
प्रश्न 7	बहुवचन शब्द लिखो । बिल्ली- _____	1
प्रश्न 8	विलोम शब्द लिखो । खट्टा - _____	1
प्रश्न 9	मुहावरा का अर्थ लिखिए । पसीना बहाना - _____	1
प्रश्न 10	ये क्या गढ़ते हैं ? लेखक - _____	1
प्रश्न 11	अर्थ लिखो । भेद - _____	1

प्रश्न 12	रेफ (c) लगाकर सही शब्द बनाएँ   कुसी - -----	1
प्रश्न 13	दिए गए वाक्य से एक संख्या वाले शब्द ढूँढ़कर लिखो   आठ बजे तक सुनीता नहा-धोकर तैयार हो गई   :- _____	1
प्रश्न 14	लिंग बदलो   दर्जी - _____	1
प्रश्न 15	दिए गए द्विरूक्त व्यंजन वाले शब्द की तरह एक और शब्द बनाएँ   पक्का - _____	1
<b>सृजनात्मक लेखन</b>		
प्रश्न 1	गांधी जी के बारे में पाँच वाक्य लिखिए   -----	5

प्रश्न 2	किसी एक वाद्य यंत्र का चित्र बनाकर चार वाक्य लिखो ।  -----  -----  -----  -----  -----  -----  -----  -----	5
प्रश्न 3	नारियल के पेड़ का चित्र बनाकर चार वाक्य लिखो ।	5



	<b>सुलेख</b>	5
	<p>दिए गए अनुच्छेद को सुंदर एवम साफ अक्षरों में लिखें ।</p> <p>मनुष्य और पेड़-पौधे का साथ आदिकाल से रहा है 1 यदि कहा जाए कि पेड़-पौधे मनुष्य के पहले साथी हैं तो कोई अतिशयोक्ति न होगी । भूखे मनुष्य को पेड़ों ने फल-फूल दिया और तन ढकने को अपनी छाल एवं पत्तियाँ । उसने अपनी शीतल छाया में मानव को आश्रय दिया । शायद इसी बात को वर्तमान और भावी पीढ़ी तक पहुँचाने के लिए वृक्षों की पूजा की जाती है ।</p> <hr/> <hr/> <hr/> <hr/> <hr/> <hr/> <hr/> <hr/> <hr/> <hr/> <hr/> <hr/> <hr/> <hr/> <hr/> <hr/>	