

KENDRIYA VIDYALAYA AFS, BAGDOGRA**YEARLY EXAMINATION****SESSION- (2018-19)**

SUBJECT	ENGLISH	CLASS	III
TIME	2 HOURS	MAXIMUM MARKS	80

NAME _____

SECTION _____

ROLL NO. _____

MARKS OBTAINED- _____

INVIGILATOR'S SIGNATURE- _____ EXAMINER SIGNATURE: _____

Instructions : All questions are compulsory-**READING****UNSEEN PASSAGE****Read the following passage and answer the following questions-**

A peacock was extremely proud of his looks. He would admire his own beauty in front of other birds. He would boastfully say, "look at me! How beautiful are my feathers and tail. I'm the most beautiful bird in this

	<p>world.”</p> <p>The proud peacock would dance merrily spreading his long colourful feathers.</p> <p>One day, he went near the forest lake. The he met a crane. Seeing the crane, the peacock mocked at him, “what colourless feathers you have! You look so ordinary!”</p> <p>The crane replied humbly, “of course your feathers are colourful, bright and beautiful. But with you feathers, You can’t fly high up. However my colourless, plain feathers have the strength to carry me up in the high sky.” The moral of the story is “WORTHLESS BEAUTY IS NOT APPRECIABLE.”</p>	
<p>1</p> <p>ans</p>	<p>Who is extremely proud of his looks?</p> <hr/> <hr/>	<p>1</p>
<p>2</p> <p>Ans</p>	<p>Where would he admire his beauty?</p> <hr/> <hr/>	<p>1</p>
<p>3</p> <p>Ans</p>	<p>What does the peacock say about himself?</p> <hr/> <hr/>	<p>1</p>
<p>4</p> <p>Ans</p>	<p>Who dance merrily?</p> <hr/> <hr/>	<p>1</p>
<p>5</p>	<p>How did the peacock dance?</p> <hr/>	<p>1</p>

Ans	_____	
6	Where does the peacock go one day?	1
Ans	_____ _____	
7	Encircle the right one-	1
Ans	One day he met a - Crane / peacock	
8	What is the moral of the story?	1
ans	_____ _____ _____	
9	Write full of form of the given word	1
Ans	Can't _____	
10	Write the opposite word of the given word	1
	Up - _____	
<u>READING</u>		
<u>SEEN PASSAGE</u>		
Read the following passage and answer the following questions-		
<p>Once upon a time there was a small hill. A path went up the hill. It went through thick and lovely woods of pine and fir trees. People often walked on it to a holy place.</p> <p>One day when the sun shone high in the sky, many people were seen climbing up the hill. They were climbing slowly and carefully.</p> <p>A girl also climbed the hill with them. Her name was Meena. Meena was twelve years old. She carried a small boy on her back.</p>		

1	Complete the sentence-	1
Ans.	Once upon a time there was a small_____.	
2	What was going on the hill?	1
Ans.	_____ _____	
3	Where were the people going?	1
Ans.	_____ _____	
4	Where was the sun shining?	1
Ans.	_____ _____	
5	Encircle the right one-	1
Ans.	How many people are climbing up the hill? One / four / many	
6	What is the name of the girl?	1
Ans.	_____ _____	
7	How old was Meena?	1
Ans.	_____ _____	

<p>8</p> <p>Ans.</p>	<p>What is the girl carrying on her back?</p> <hr/> <hr/>	<p>1</p>
<p>9</p> <p>Ans.</p>	<p>Find out two words ending with “ly”</p> <hr/>	<p>1</p>
<p>10</p> <p>Ans.</p>	<p>Write the opposite word of “girl”</p> <hr/>	<p>1</p>
<p><u>PROSE AND POETRY</u></p>		
<p>1</p> <p>Ans.</p>	<p>Where was the man going?</p> <hr/> <hr/>	<p>1</p>
<p>2</p> <p>Ans.</p>	<p>Why did the child go with the puppy?</p> <hr/> <hr/>	<p>1</p>
<p>3</p> <p>Ans.</p>	<p>How old is the speaker?</p> <hr/> <hr/>	<p>1</p>
<p>4</p> <p>Ans.</p>	<p>How does the monkey swing?</p> <hr/> <hr/>	<p>1</p>
<p>5</p>	<p>What is the secret the speaker is hiding?</p> <hr/>	<p>1</p>

Ans.	<hr/>	
6 Ans.	What does the baby do with the pebbles? <hr/> <hr/> <hr/> <hr/>	2
7 Ans.	When does the baby laugh? <hr/> <hr/> <hr/> <hr/>	2
8 Ans.	What happened to the little tiger cub when he chased the frog? <hr/> <hr/> <hr/> <hr/>	2
9 Ans.	Why is the camel called “the ship of the desert”? <hr/> <hr/> <hr/> <hr/>	2
10 Ans.	What does the child decide to do? <hr/> <hr/>	2

	<hr/> <hr/>	
	<u>GRAMMAR</u>	
1	Underline the noun in the given sentence- -I met a man as I went walking.	1
2 Ans.	Choose the right word- Bruno is now _____ . (fighting/happy)	1
3 Ans.	Write the rhyming word- Hill - _____	1
4 Ans.	Write the full form of the given word- I'll- _____	1
5 Ans.	Make two new words from the word "BLACKBOARD" _____	1
6 Ans.	Make a sentence from the word "wiggle" _____ _____	1
7 Ans.	Fill in the blanks using the word "was" or "were" There _____ a mother tiger and her small cub.	1
8 Ans.	Underline the silent letter- WALK	1

<p>9</p> <p>Ans.</p>	<p>Fill in the blanks with the right word from the given options-</p> <p>The seals dive _____ the icy water. (into/onto)</p>	<p>1</p>
<p>10</p> <p>Ans.</p>	<p>Write the opposite word of “FOOLISH”</p> <p>_____</p> <p>_____</p>	<p>1</p>
<p>11</p> <p>Ans.</p>	<p>Add “ish” to make a new word-</p> <p>I slipped on a banana peel. I feel _____. (Fool)</p>	<p>1</p>
<p>12</p> <p>Ans.</p>	<p>Underline the action word in the given sentence-</p> <p>The lion walks on padded paws.</p>	<p>1</p>
<p>13</p> <p>Ans.</p>	<p>Underline the adjective words-</p> <p>The camel’s feet are thick and padded.</p>	<p>1</p>
<p>14</p> <p>Ans.</p>	<p>Choose the right answer-</p> <p>Name the ship of the desert</p> <p>A) Camel B) Lion</p>	<p>1</p>
<p>15</p> <p>Ans.</p>	<p>Choose and tick the word with a “J” sound-</p> <p>a) Goose b) Jam</p>	<p>1</p>
<p><u>CREATIVE WRITING</u></p>		
<p>1</p> <p>Ans.</p>	<p>Write five sentences about “TIGER”</p> <p>_____</p> <p>_____</p> <p>_____</p> <p>_____</p> <p>_____</p>	

Ans.	<hr/> <hr/> <hr/> <hr/> <hr/> <hr/> <hr/> <hr/> <hr/> <hr/> <hr/> <hr/> <hr/> <hr/> <hr/> <hr/> <hr/> <hr/> <hr/> <hr/> <hr/> <hr/> <hr/> <hr/>	
	<u>SPELLING</u>	
	<p>Encircle the correct spelling-</p> <p>1 Squrrel Squirrel Squirral</p> <p>2 Bread Brad Braed</p> <p>3 Patent Patient Pateint</p> <p>4 Thogh Though Thuogh</p>	<p>1</p> <p>1</p> <p>1</p> <p>1</p>
	<p>Make meaningful words from the jumbled letters-</p> <p>5 e s r h o- _____</p> <p>6 k m o y e n- _____</p>	<p>1</p> <p>1</p>

7	e r s i s t - _____	1
8	e l m c a - _____	1
<p>Fill in the blanks to make a complete and meaningful word-</p>		
9	e n _ _ u _ _ h	1
10	e x _ i t e _ e n t	1
<p><u>HANDWRITING</u></p>		
	<p>The teacher teaches us lessons. They teach us about out body, health and surrounding. They teach us discipline and good habits. They give us their wise advice. Many of the ways for our life are formed because of our teachers. On 5th September, students honour their teachers and celebrate teacher’s day.</p> <hr/> <hr/> <hr/> <hr/> <hr/> <hr/> <hr/> <hr/> <hr/> <hr/> <hr/> <hr/> <hr/> <hr/> <hr/> <hr/> <hr/> <hr/> <hr/> <hr/> <hr/> <hr/> <hr/> <hr/>	5

CODE NO. : A	TOTAL PAGES : 9
---------------------	------------------------

KENDRIYA VIDYALAYA AFS BAGDOGRA

ANNUAL EXAMINATION (2018 -19)

SUBJECT :	EVS	CLASS :	III
TIME :	120 MINUTES	Max. Marks.	80

Instruction: ALL QUESTIONS ARE COMPULSARY.


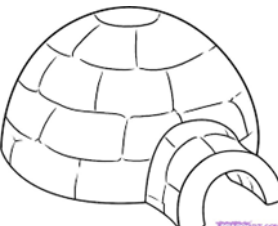
NAME : _____ **SEC :** _____ **ROLL NO.** _____ **DATE:** _____


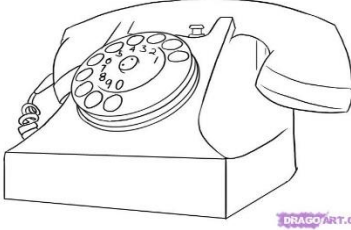




MARKS OBTAINED- _____



SIGNATURE OF INVIGILATOR

SIGNATURE OF EXAMINER

OBSERVATION

1.	Observe the pictures and write their names	
a.	<p>Write the spices name.</p> <p>_____</p> 	1M
b.	<p>Write the name of the house.</p> <p>_____</p> 	1M
		1M

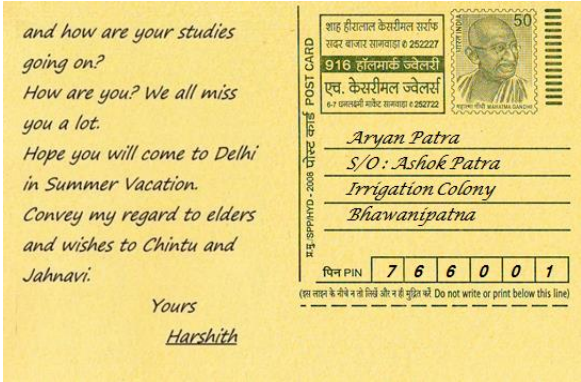
<p>c.</p>	<p>Who is in the picture?</p> <hr/> 	
<p>d.</p>	<p>What is the instrument?</p> <hr/> 	<p>1M</p>
<p>e.</p>	<p>Write the name of source of water.</p> <hr/> 	<p>1M</p>
<p>f.</p>	<p>Who is in the picture?</p> <hr/> 	<p>1M</p>
<p>g.</p>	<p>Write the pot's name.</p> <hr/> 	<p>1M</p>
<p>h.</p>	<p>What is this image?</p> <hr/> 	<p>1M</p>

i.	<p>What is the sign say?</p> <p>_____</p> 	1M						
j.	<p>Write the animal's name.</p> <p>_____</p> 	1M						
2. Ans :	<p>Write two ways of saving water.</p> <p>_____</p> <p>_____</p>	2M						
3.	<p>Complete the table.</p> <table border="1" data-bbox="260 1003 1369 1223"> <thead> <tr> <th data-bbox="260 1003 683 1048">Name of the animal</th> <th data-bbox="683 1003 1369 1048">Why do we keep them?</th> </tr> </thead> <tbody> <tr> <td data-bbox="260 1048 683 1137">ox</td> <td data-bbox="683 1048 1369 1137"></td> </tr> <tr> <td data-bbox="260 1137 683 1223">Honey bee</td> <td data-bbox="683 1137 1369 1223"></td> </tr> </tbody> </table>	Name of the animal	Why do we keep them?	ox		Honey bee		2M
Name of the animal	Why do we keep them?							
ox								
Honey bee								
4. Ans :	<p>Who takes care of Tara? How?</p> <p>_____</p> <p>_____</p>	2M						
5.	<p>Write the four directions?</p> <p>_____</p> <p>_____</p>	2M						
6.	<p>Write names of two things :</p> <p>Natural things : _____</p> <p>Man made things : _____</p>	2M						
7. Ans :	<p>Write the steps for making clay pots in proper order / sequence.</p> <p>_____</p> <p>_____</p>	5M						

8.

Look at the postcards and answer the questions.

5M



a. Who has written this letter?

Ans : _____

b. To whom has it been written?

Ans : _____

c). What is the PIN written on the postcard?

Ans _____

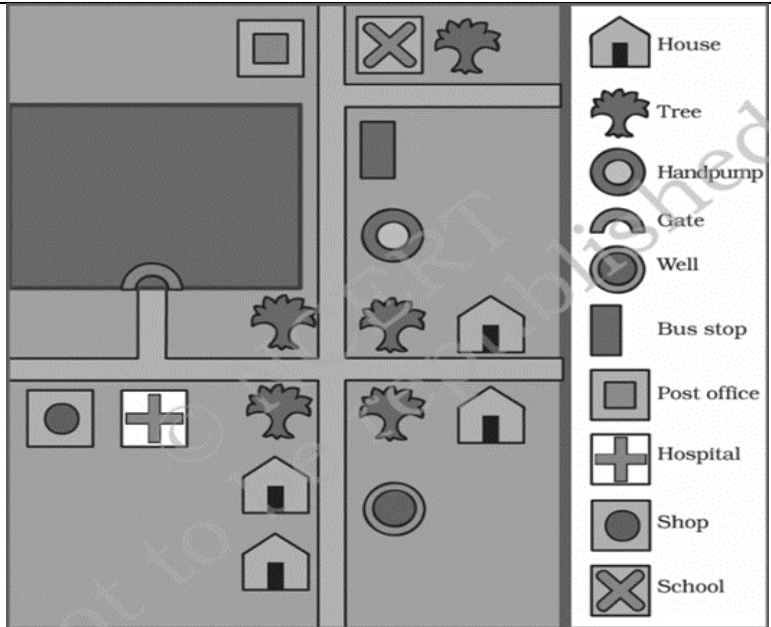
d. What is the cost the postcard?

Ans. _____

e. which image on the postcard?

	Ans. _____	
	IDENTIFICATION	
9.	Fill in the blanks by choosing the correct word :	
a	We get sugar from _____. (plants/animals)	1M
b	We eat _____ of cabbage plants. (flower/leaves)	1M
c	India's national game is _____ (hockey / cricket)	1M
d	An international game is _____. (cricket /Gilli danda)	1M
e.	A _____ is a place where we live safely. (temple / house)	1M
f.	Cotton cloth is good to wear in _____(summer/winter)	1M
g.	Choose the correct answer: Krishna/Kaveri likes to stay in his own house.	1M
h.	Write true or false. Letter is not delivered in hilly areas. <input type="checkbox"/>	1M
i.	Water is precious we should not waste it. <input type="checkbox"/>	1M
j. Ans :	Who fetches water in madho's house? _____	1M

<p>10.</p>	<p>When you are sick, do you take any medicine which we get from plants? What do you take when you.</p> <p>Have a stomach-ache _____ _____</p> <p>Have a toothache _____ _____</p>	<p>2M</p>
<p>11.</p>	<p>Encircle the odd one out.</p> <p>a) Lemon , Orange, Garlic , Mausambi</p> <p>a) Honey, Meat, Banana, Eggs.</p>	<p>2M</p>
<p>12.</p>	<p>How many players are needed to play?</p> <p>Kabaddi _____</p> <p>Chess _____</p>	<p>2M</p>
<p>13.</p>	<p>Why do people of hilly areas built houses with sloping roof?</p> <p>_____</p> <p>_____</p> <p>_____</p>	<p>2M</p>
<p>14.</p>	<p>Why do we keep pet in our house?</p> <p>_____</p> <p>_____</p> <p>_____</p>	<p>2M</p>
<p>15.</p>	<p>Look at the map and answer the questions.</p>	<p>5M</p>



a) How many hand pumps are there in the map?

Ans: _____

b. How many trees are there in the map?

Ans: _____

c. What is near to the shop?

Ans: _____

d. Is the bus stop closer to the school or to the hospital?

Ans: _____

e. How many houses are there in the map?

Ans: _____

DISCOVERY OF FACTS

16. Answer the following in one word :

a. Write one leaves that we eat?

1M

b. Who does most work in your family?

1M

c.	Who was cleverer crow or sparrow? _____	1M								
d.	Letters are sorted in police station. <input type="checkbox"/> (True/false)	1M								
e.	Complete the following statement: For making a house we need- _____	1M								
17.	Match column A with column B <table style="width: 100%; border: none;"> <tr> <td style="text-align: center;"><u>A</u></td> <td style="text-align: center;"><u>B</u></td> </tr> <tr> <td>Badminton</td> <td>bat ball</td> </tr> <tr> <td>Ludo</td> <td>shuttle – cock</td> </tr> <tr> <td>Cricket</td> <td>dice</td> </tr> </table>	<u>A</u>	<u>B</u>	Badminton	bat ball	Ludo	shuttle – cock	Cricket	dice	3M
<u>A</u>	<u>B</u>									
Badminton	bat ball									
Ludo	shuttle – cock									
Cricket	dice									
18.	How boat house is different from other house. Also draw their pictures. <table border="1" style="width: 100%; border-collapse: collapse;"> <thead> <tr> <th style="text-align: center;"><u>House on boat</u></th> <th style="text-align: center;"><u>Other house</u></th> </tr> </thead> <tbody> <tr> <td style="height: 40px;"></td> <td></td> </tr> <tr> <td style="height: 40px;"></td> <td></td> </tr> <tr> <td style="height: 100px;"></td> <td></td> </tr> </tbody> </table>	<u>House on boat</u>	<u>Other house</u>							3M
<u>House on boat</u>	<u>Other house</u>									
19.	Write the name of two animals who can – Bite us : _____ , _____	3M								

	<p>Harm us : _____ , _____</p> <p>Eat us : _____ , _____</p>	
<p>20.</p>	<p>Draw a food chain using the following.</p> <div style="border: 1px solid black; padding: 5px; width: fit-content; margin: 10px auto;"> <p>Grass, Snake, Eagle, Frog, Grasshopper</p> </div> <div style="text-align: center; margin-top: 20px;"> </div>	<p>3M</p>
<p>21.</p>	<p>How are these people related to each other?</p> <div style="text-align: center; margin: 10px 0;"> </div> <hr style="border: 0.5px solid black; margin-top: 20px;"/> <hr style="border: 0.5px solid black; margin-top: 10px;"/> <hr style="border: 0.5px solid black; margin-top: 10px;"/>	<p>3M</p>
<p>22.</p>	<p>Write the name of two unstitched clothes and draw a beautiful piece of cloth</p>	<p>5M</p>

a) _____ **b)** _____

CODE NO. : A	TOTAL PAGES : 14
---------------------	-------------------------

KENDRIYA VIDYALAYA, AFS, BAGDOGRA

YEARLY EXAMINATION (2018 -19)

SUBJECT :	MATHS		CLASS :	III
TIME :	2 Hours		Max.Marks.	80

NAME: _____ **SEC:** _____ **ROLL NO.** _____

SIGNATURE OF INVIGILATOR

SIGNATURE OF EXAMINER

Instructions: ALL QUESTIONS ARE COMPULSORY.

CONCEPT (KNOWLEDGE)

	VSA	
1	Convert the following in paise :- Half rupee = _____ paise	1M
2	Find :- 14 ÷ 7 = _____	1M
3	Fill in the blanks :- 16 litres = _____ millilitres	1M

4	<p>How many litres of water it can hold ----- spoon ----- more / less than 1 litre.</p>	1M						
5	<p>Choose the correct answer --- 175 is an (odd / even) number .</p>	1M						
6	<p>Write the answer – 9 X 8 = _____</p>	1M						
7	<p>Write the multiplication facts :- 5 X _____ = 35</p>	1M						
8	<p>How many times --- 6 times 2 is _____</p>	1M						
9	<p>Convert the following :- 1 kg 500 g = _____ g</p>	1M						
10	<p>Find out how much of the things is bought at one time Salt ----- 1 gram / 1 kilogram</p>	1M						
	SA							
11	<p>Match their weight :-</p> <table data-bbox="201 1720 967 1906"> <tr> <td>Puppy</td> <td>more than 1000 kg</td> </tr> <tr> <td></td> <td>10 kg</td> </tr> <tr> <td>Elephant</td> <td>2 kg</td> </tr> </table>	Puppy	more than 1000 kg		10 kg	Elephant	2 kg	2M
Puppy	more than 1000 kg							
	10 kg							
Elephant	2 kg							
12	<p>Write the value of each note and coin :-</p>							



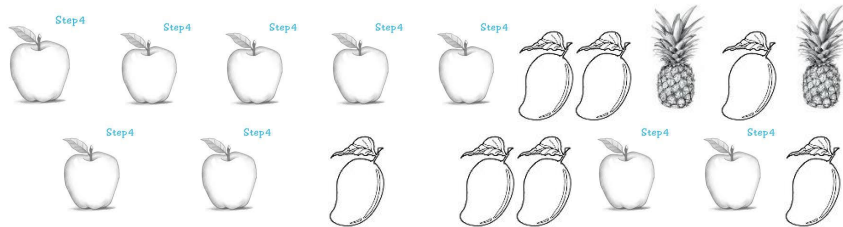
2M

13

Look at the different fruits in the table . Complete the table :-

2M

Name of the fruits	Number of fruits
Apples	
Mango	
Pine apple	



Answer the following questions :-

_____ is the most in number .

14

Divide into groups of 10 using 10 times table.

2M

$30 \div 10 = \underline{\quad\quad\quad}$, $\underline{\quad\quad\quad} \times \underline{\quad\quad\quad} = \underline{\quad\quad\quad}$

15

Match the right pairs :-

2M

About 5 litres

water tank

1000 litres

water surahi

About 12 litres

Bucket

Less than $\frac{1}{2}$ litres

Eye dropper

UNDERSTANDING

VSA

16 Find the cost of ----

One toy car and a ball -- _____



1M

17 Fill in the blanks :-

1 Litres = _____ millilitres

1M

18 Fill in the blanks :---

All numbers that end with 1, 3, 5, 7 and 9 are called _____

Numbers . (odd / even)

1M


19 Rewrite using the ' + ' sign :--

3 X 20 is _____ + _____ + _____





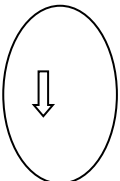
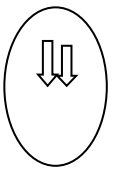
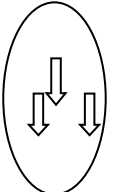
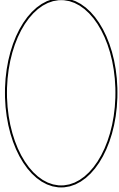
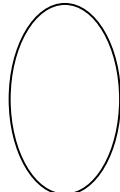
1M

20 Find which of the following is heavier :---

A water bottle or a cricket ball (Tick the correct answer)




1M

21	<p>Which of this need a bigger bag :--- (Tick the correct answer)</p> <p>1 kg popcorn or 1 kg potatoes</p>	1M
	SA	
22	<p>Which ones will weigh less than 1 kilogram.</p> <div style="display: flex; justify-content: space-around; align-items: center;"> <div style="text-align: center;">  <p>A big pumpkin</p> </div> <div style="text-align: center;">  <p>pencil box</p> </div> <div style="text-align: center;">  <p>brick</p> </div> <div style="text-align: center;">  <p>an apple</p> </div> </div>	2M
23	<p>Look at the pattern and complete the following :-</p> <p>10 , 20 , 30 , _____ , _____ , _____ , _____</p>	2M
24	<p>Continue the pattern :-</p> <p>(a) A B C A B C A _____</p> <p>(b)</p> <div style="display: flex; justify-content: space-around; align-items: center;">      </div>	2M
25	<p>Write the following names in the alphabetical order :-</p> <p>KAVITA , RAJA , ADIL , NARANG</p> <p>_____</p>	2M
26	<p>Use notes and coins to show the following amounts of money .</p> <p>130 Rupees</p> <div style="border: 1px solid black; width: 500px; height: 100px; margin: 20px auto;"></div>	2M

27

Rohan , Jacob and Geeta measured their hands . They stuck their strips as shown **4M**



Look at the picture and fill in the blanks :

- (a) The length of Jacob's hand is _____ (more / less) than Geeta's Hand.
- (b) The length of Geeta's hand is _____ (more / less) than Rohan's Hand.
- (c) _____ has the longest hand.
- (d) _____ has the shortest hand .

ABILITY TO COMPUTE

VSA

28

Subtract the following :-


$$\begin{array}{r}
 \text{Rs } 103.50 \\
 - \text{Rs } 62.00 \\
 \hline
 \\
 \hline
 \end{array}$$

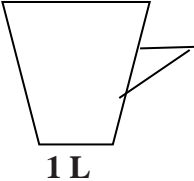
1M

29

Share 25 bananas among 5 monkeys . How many banana for each monkey ?

1M

30	<p>If we add 1 to any odd number we get an _____ (even / odd) Number .</p>	1M																												
31	<p>A shirt has 5 buttons . How many buttons would 3 shirts have ?</p>	1M																												
32	<p>How much do 4 toffees cost ?</p> <div style="text-align: center;"> <div style="border: 1px solid black; display: inline-block; padding: 2px;">Rs 5 each</div>  </div> <p>_____ rupees</p>	1M																												
33	<p>Add the following :-</p> $ \begin{array}{r} \text{Rs } 30.50 \\ + \text{Rs } 32.00 \\ \hline \\ \hline \end{array} $	1M																												
SA																														
34	<p>This board shows the number of students in each class. It also shows the number Of students present and absent .</p> <table border="1" data-bbox="183 1534 1353 2040"> <thead> <tr> <th>Class</th> <th>Number of students</th> <th>Students present</th> <th>Students absent</th> </tr> </thead> <tbody> <tr> <td>Class I</td> <td>27</td> <td>25</td> <td>2</td> </tr> <tr> <td>Class II</td> <td>23</td> <td>22</td> <td>1</td> </tr> <tr> <td>Class III</td> <td>24</td> <td>21</td> <td>3</td> </tr> <tr> <td>Class IV</td> <td>22</td> <td>18</td> <td>4</td> </tr> <tr> <td>Class V</td> <td>25</td> <td>23</td> <td>2</td> </tr> <tr> <td>Total</td> <td></td> <td></td> <td></td> </tr> </tbody> </table>	Class	Number of students	Students present	Students absent	Class I	27	25	2	Class II	23	22	1	Class III	24	21	3	Class IV	22	18	4	Class V	25	23	2	Total				2M
Class	Number of students	Students present	Students absent																											
Class I	27	25	2																											
Class II	23	22	1																											
Class III	24	21	3																											
Class IV	22	18	4																											
Class V	25	23	2																											
Total																														

	<p>(a) How many children in al are there in the school ?</p> <p>_____</p> <p>(b) How many children in all are absent on that day ?</p> <p>_____</p>	
35	<p>Share 12 balloons among 3 boys . How many balloons for each boy ?</p> <p>_____ ÷ _____ = _____</p> <p>Each boy has _____ balloons .</p>	2M
36	<p>How many 200 mL glass can fill 1 L jug.</p>  <p>_____</p>	2M
37	<p>Write all even numbers between 165 and 175.</p> <p>_____</p>	2M
38	<p>Write the answer:-</p> <p>(a) 12 X 100 = _____</p> <p>(b) 9 X 110 = _____</p>	2M

39

Multiply :-

(a) 48×4

(b) 35×3

(c) 51×16

(d) 12×14



4
M


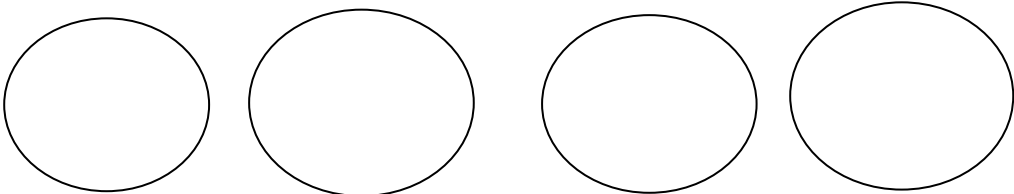
PSA

VSA

40 You can visit this self service store . What can you buy if you have twenty rupee note ?

1M



<p>41</p>	<p>A frog jump 2 steps at a time . How many jump will the frog reach 10 ?</p> <p>_____</p>	<p>1M</p>
<p>42</p>	<p>Draw 12 flowers . Put them into 2 equal group .</p> <div style="text-align: center;">  </div>	<p>1M</p>
<p>43</p>	<p>Nasir had to fill his bottle 16 times from the tap to fill the pot . But Raju Had to fill his bottle only 8 times to fill the pot.</p> <p>Nasir's bottle can hold _____ (thrice / half) as much as Raju's bottle .</p>	<p>1M</p>
<p>44</p>	<p>Continue the pattern and fill in the following :--</p> <p>96 , 98 , _____ , 102 , _____</p>	<p>1M</p>
<p>45</p>	<p>There are 16 laddoos . Put them into 4 equal groups .</p> <div style="text-align: center;">  </div>	<p>1M</p>

46 Help Reeta to match the things with their right amounts to make Khichdri.

2M

(1 kg , 8 glasses , a spoon , Half kg)

(a) _____ rice

(b) _____ salt

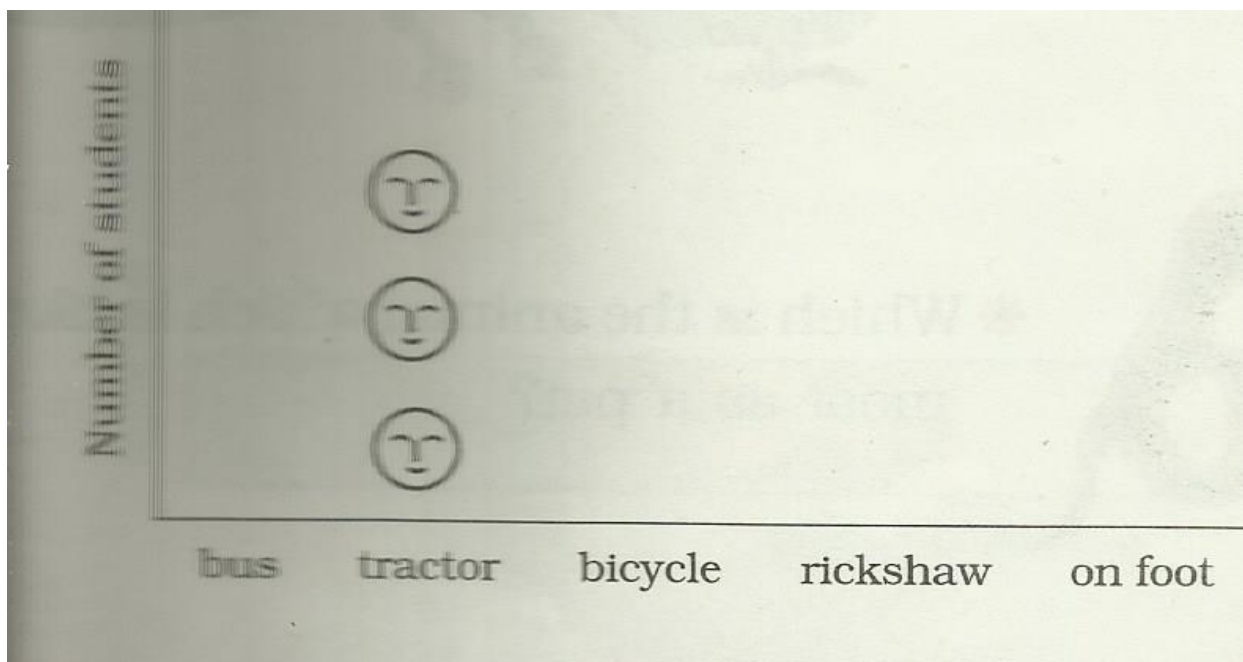
(c) _____ water


(d) _____ daal

47 Look at the table and draw faces ☺ in the chart to show how many children come by bus , bicycle , rickshaw , on foot.

2M

Ways to come	Tractor	Bus	Bicycle	Rickshaw	On foot
Number of students	3	3	6	2	8



48	<p>Hari Prashad has 60 metre of rope . He distribute it equally among his three children. How much will each child get ?</p>	2M
49	<p>Pot B holds 11 glassfuls of water . Pot A holds twice as much water as Much water as pot B . How many glasses of water are needed to fill pot A ?</p> 	2M
50	<p>Look the pattern and find the hidden sentence :-</p> <div style="border: 1px solid black; padding: 5px; text-align: center; margin: 10px auto; width: fit-content;"> <p>1 G 2 O 3 O 4 D 5 N 6 I 7 G 8 H 9 T</p> </div> <p>_____</p>	2M
	LA	
51	<p>TRAIN JOURNEY</p> <p>This train goes fromm New Jalpaiguri to Guwahati. On its way ,it stops at New Mal, Alipurduar and Goalpara stations.</p> <p>The cost of a rail ticket to different stations is given in the table.</p>	4M

Distance from New Jalpaiguri (in km)	Station	Fare (in Rs)
57	New Mal	12.50
175	Alipurduar	28.00
366	Goalpara	49.50
495	Guwahati	62.50

(a) Find the distance from New Mal to Guwahati.

_____.

(b) Find the distance from Alipurduar to Guwahati.

_____.

(c) What is the cost of ticket from New Jalpaiguri to Alipurduar.

_____.

(d) Ram has to go from New Jalpaguri to Goalpara . How much

Does he pay for three ticket ?

केन्द्रीय विद्यालय, वायुसेना स्थल बागडोगरा

वार्षिक परीक्षा

2018-19

विषय:	हिन्दी	कक्षा:	तीसरी
अवधि:	2 घंटे	पूर्णांक:	80

नाम: _____ अनुक्रमांक _____ अनुभाग _____

निरीक्षक हस्ताक्षर : _____ परीक्षक हस्ताक्षर _____ प्राप्तांक : _____

निर्देश: सभी प्रश्न अनिवार्य हैं।

पठन


अपठित गद्यांश

	नीचे दिए गए अनुच्छेद को पढ़कर प्रश्नों के उत्तर लिखो।	
	लाल किले का निर्माण सन 1648 में हुआ था यह मुगल शासन की भव्यता का प्रतीक है यह उनकी शक्ति और राजसी ठाट को दर्शाता है इसका निर्माण सम्राट शाहजहाँ ने करवाया था यह लाल पत्थरों से बना हुआ है लाल किला यमुना नदी के किनारे पर स्थित है लाल किले के सामने प्राचीन जामा मस्जिद और चाँदनी चौक है प्रतिवर्ष स्वतंत्रता दिवस के दिन भारत के प्रधानमंत्री लाल किले पर राष्ट्रीय ध्वज फहराते हैं	
प्रश्न-1	लाल किले का निर्माण कब हुआ था ? उत्तर: _____	1
प्रश्न-2	यह किसकी भव्यता का प्रतीक है ? उत्तर: _____	1

प्रश्न-3	लाल किले का निर्माण किस सम्राट ने करवाया था ? उत्तर: _____	1
प्रश्न-4	लाल किला किस रंग के पत्थरों से बना है ? उत्तर: _____	1
प्रश्न-5	लाल किला कौन सी नदी के किनारे पर स्थित है ? उत्तर: _____	1
प्रश्न-6	लाल किले के सामने क्या है ? उत्तर: _____	1
प्रश्न-7	स्वतंत्रता दिवस के दिन लाल किले पर राष्ट्रीय ध्वज कौन फहराता है ? उत्तर: _____	1
प्रश्न-8	निम्न का विलोम शब्द लिखो- रात - _____	1
प्रश्न-9	निम्न का विशेषण शब्द लिखो- _____ किला	1
प्रश्न-10	वाक्य में सर्वनाम शब्द को रेखांकित करो- यह लाल पत्थरों से बना हुआ है ।	1
	पठितगद्यांश	
	नीचे दिए गए अनुच्छेद को पढ़कर प्रश्नों के उत्तर लिखो ।	
	मीरा बहन का जन्म इंग्लैंड में हुआ था । गाँधी जी के विचारों का उन पर इतना असर हुआ कि वे अपना घर और अपने माता - पिता को छोड़कर भारत आ गईं और गाँधी जी के साथ काम करने लगीं । आजादी के बाद उन्होंने उत्तर प्रदेश के पहाड़ी गाँव गोवली में गोपाल	

	आश्रम की स्थापना की उस आश्रम में मीरा बहन का बहुत सारा समय पालतू पशुओं की देखभाल में बीतता था	
प्रश्न -1.	मीरा बहन का जन्म कहाँ हुआ था ? उत्तर - _____	1
प्रश्न 2.	मीरा बहन पर किसके विचारों का असर था ? उत्तर: _____	1
प्रश्न 3.	मीरा बहन अपना घर छोड़कर कहाँ आ गई ? उत्तर: _____	1
प्रश्न 4.	मीरा बहन किसे छोड़कर भारत आ गई ? उत्तर: _____	1
प्रश्न 5.	मीरा बहन ने किस आश्रम की स्थापना की ? उत्तर: _____	1
प्रश्न 6.	मीरा बहन ने आश्रम की स्थापना कहाँ की ? उत्तर: _____	1
प्रश्न 7.	मीरा बहन का बहुत सारा समय किसमें बीतता था ? उत्तर: _____	1
प्रश्न 8.	निम्न शब्द का लिंग बदलो- भाई - _____	1
प्रश्न 9.	निम्न वाक्य को शुद्ध करो - मीरा बहन जन्म इंग्लैंड हुआ था _____	1

प्रश्न 10.	गद्यांश में से हमारे देश के राष्ट्रपिता का नाम चुन कर लिखो- _____	1
	लेखन	
प्रश्न-1	अवन्ती ने किसकी दुकान खोली? उत्तर: _____	1
प्रश्न-2	गुरुजी थैली में क्या लिए जा रहे थे ? उत्तर: _____	1
प्रश्न-3	सर्दी में नाक कैसी हो जाती है ? उत्तर: _____	1
प्रश्न-4	काबुली वाले ने किससे मिर्च खरीदी ? उत्तर: _____	1
प्रश्न-5	आम हमें किस मौसम में मिलते हैं ? उत्तर: _____	1
प्रश्न-6	अवन्ती ने कपड़ा अलमारी में क्यों बंद कर दिया ? उत्तर: _____ _____	2
प्रश्न-7	शिवदास ने गुरुजी की थैली देखकर अपनी गाड़ी क्यों दे दी ? उत्तर: _____ _____	2
प्रश्न-8	बच्चा बूढ़े आदमी को क्या बताना चाहता था ?	2

	उत्तर: _____ _____	
प्रश्न-9	नारियल के पेड़ की दो उपयोगिताएँ लिखिए ? उत्तर: _____ _____ _____ _____	2
प्रश्न-10	सेठ अवन्ती से क्यों जलने लगा ? उत्तर: _____ _____	2
	<u>व्याकरण</u>	
प्रश्न-1	चित्र देखकर मुहवरा लिखो-  _____ अँधेरा	1
प्रश्न-2	रेखांकित शब्द का अर्थ लिखो- सेठ को <u>ईर्ष्या</u> होने लगी _____	1
प्रश्न-3	तुकवाले शब्द लिखो- जर्दी- _____	1

प्रश्न-4	चन्द्र बिंदु या अनुश्वर लगाकर शब्द को ठीक करो- छाव	1
प्रश्न-5	'ई' की मात्रा लगाकर सही शब्द बनाओ- इमल-_____	1
प्रश्न-6	बहुवचन लिखें । कहानी- _____	1
प्रश्न-7	सही निशा नलगाओ- (, ?, !) तुम्हें घर पर कौन कहानी सुनाता है	1
प्रश्न-8	विलोम शब्द लिखो। मित्र _____	1
प्रश्न-9	विशेषण शब्द लिखें । _____ नाक	1
प्रश्न-10	लिंग बदलें। नाना-_____	1
प्रश्न-11	दिए गये शब्द में नुक्ता का प्रयोग करें । कागज _____, मजा _____	1
प्रश्न-12	उदाहरण देखकर संयुक्त अक्षर वाले शब्द लिखें- जैसे-बस्ते _____	1
प्रश्न-13	दिए गये शब्द का प्रयोग करके वाक्य बनाओ- सुबह- _____	1
प्रश्न-14	पर्यायवाची शब्द लिखो- प्रणाम- _____	1

प्रश्न-15	संज्ञा शब्द को रेखांकित करो- कल हम दिल्ली जाएँगे।	1
	<u>सृजनात्मक-लेखन</u>	
प्रश्न 1	रोटी बनाने की विधि पाँच वाक्यों में लिखें । <hr/> <hr/> <hr/> <hr/> <hr/> <hr/> <hr/> <hr/> <hr/> <hr/> <hr/> <hr/> <hr/> <hr/> <hr/>	5
प्रश्न-2	अपनी मनपसंद पेड़ का चित्र बनाकर उसके बारे में पाँच वाक्य लिखो 1 <hr/> <hr/> <hr/>	5

	<hr/> <hr/> <hr/> <hr/> <hr/> <hr/> <hr/> <hr/> <hr/> <hr/>	
प्रश्न-3.	मिर्च का चित्र बनाकर मिर्च के बारे में चार वाक्य लिखो 1	5
	<hr/> <hr/> <hr/> <hr/> <hr/> <hr/> <hr/> <hr/> <hr/> <hr/>	

	<u>वर्तनी</u>	
	शब्दों को शुद्ध करके लिखिए ।	
1	पंचतत्र - _____	1
1	नमसते - _____	1
2	संशार- _____	1
3	मित्तर - _____	1
4	मूरख - _____	1
5		
	सही शब्दों पर गोला लगाओ-	
1	प्रशांश प्रशंसा प्रशंषा	1
2	साप सापं साँप	1
3	नारीयल नारियल नरियल	1
4	बर्तन बरतन बर्तर्न	1
5	बुढा बूढा बूढा	

सुलेख

नीचे दिए गए अनुच्छेद को सुन्दर एवं साफ़ अक्षरों में लिखें ।

5

आत्मविश्वास जीवन की सफलता का सबसे बड़ा रहस्य है आत्मविश्वास का अर्थ है अपनी शक्तियों पर विश्वास करना | अपनी शक्तियों को पहचानकर ही हम आत्मविश्वास हासिल कर सकते हैं यदि खुद पर विश्वास न हो तो कुत्ता भी भेड़िया और रस्सी भी साँप नजर आने लगती है | आत्मविश्वास वाला आदमी आशावादी होता है और अपने लक्ष्य तक पहुँचने के लिए अपनी योग्यता पर भरोसा करता है |
